

National Testing Agency

AGRI BUSINESS MANAGEMENT PG 23rd Sep 2020 Shift 1

Question Paper Name :

Set 2

Subject Name :

AGRI BUSINESS MANAGEMENT PG

Creation Date :

2020-09-23 13:49:40

Duration :

120

Total Marks :

480

Display Marks:

Yes

Share Answer Key With Delivery Engine :

Yes

Actual Answer Key :

Yes

AGRI BUSINESS MANAGEMENT PG

Group Number :

1

Group Id :

21052922

Group Maximum Duration :

0

Group Minimum Duration :

120

Show Attended Group? :

No

Edit Attended Group? :	No
Break time :	0
Group Marks :	480
Is this Group for Examiner? :	No

AGRI BUSINESS MANAGEMENT PG

Section Id :	21052926
Section Number :	1
Section type :	Online
Mandatory or Optional :	Mandatory
Number of Questions :	108
Number of Questions to be attempted :	108
Section Marks :	480
Display Number Panel :	Yes
Group All Questions :	Yes
Mark As Answered Required? :	Yes
Sub-Section Number :	1
Sub-Section Id :	21052926
Question Shuffling Allowed :	Yes

Question Number : 1 Question Id : 2105292581 Question Type : MCQ Option Shuffling : No Display Question Number : Yes Is Question Mandatory : No Single Line Question Option : No Option Orientation : Vertical Correct Marks : 4 Wrong Marks : 1

India has set a target to phase out single-use plastics by

1. 2030
2. 2025
3. 2024
4. 2022

Options :

21052910321. 1
21052910322. 2
21052910323. 3
21052910324. 4

Question Number : 2 Question Id : 2105292582 Question Type : MCQ Option Shuffling : No Display Question Number : Yes Is Question

Mandatory : No Single Line Question Option : No Option Orientation : Vertical

Correct Marks : 4 Wrong Marks : 1

What is the monthly amount that farmers are required to invest under Pradhan Mantri Kisan Pension Yojana to avail the pension benefit?

1. Rs.100
2. Rs.500
3. Rs.200
4. Rs.1000

Options :

21052910325. 1
21052910326. 2

21052910327. 3

21052910328. 4

Question Number : 3 Question Id : 2105292583 Question Type : MCQ Option Shuffling : No Display Question Number : Yes Is Question

Mandatory : No Single Line Question Option : No Option Orientation : Vertical

Correct Marks : 4 Wrong Marks : 1

What is the contribution of agriculture and allied sector to the country's GVA (2019-20)?

1. <10%
2. 10-15%
3. 15-20%
4. >20%

Options :

21052910329. 1

21052910330. 2

21052910331. 3

21052910332. 4

Question Number : 4 Question Id : 2105292584 Question Type : MCQ Option Shuffling : No Display Question Number : Yes Is Question

Mandatory : No Single Line Question Option : No Option Orientation : Vertical



Correct Marks : 4 Wrong Marks : 1

Government has introduced a TMA scheme to provide financial assistance for exporting specified agriculture products to international market. What does "M" in TMA stands for?

1. Marketing
2. Money
3. Medium
4. Micro

Options :

21052910333. 1
21052910334. 2
21052910335. 3
21052910336. 4

Question Number : 5 Question Id : 2105292585 Question Type : MCQ Option Shuffling : No Display Question Number : Yes Is Question

Mandatory : No Single Line Question Option : No Option Orientation : Vertical

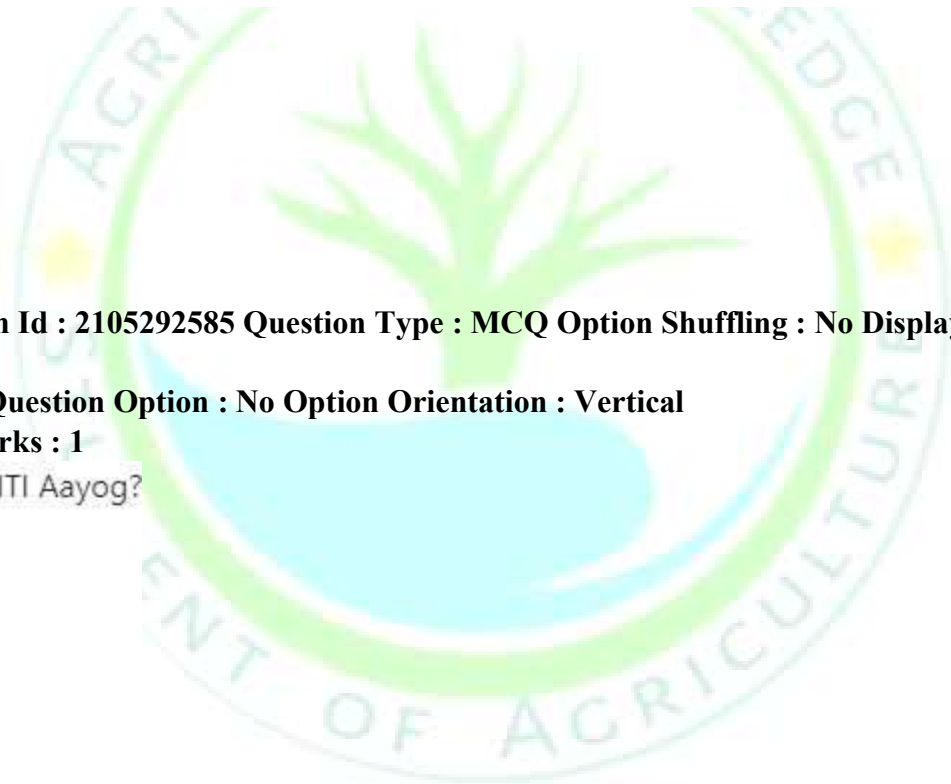
Correct Marks : 4 Wrong Marks : 1

What does "T" stand for in NITI Aayog?

1. Talent
2. Training
3. Transforming
4. Technical

Options :

21052910337. 1
21052910338. 2
21052910339. 3



21052910340. 4

Question Number : 6 Question Id : 2105292586 Question Type : MCQ Option Shuffling : No Display Question Number : Yes Is Question Mandatory : No Single Line Question Option : No Option Orientation : Vertical Correct Marks : 4 Wrong Marks : 1

Corona virus emerged from

1. Wuhan
2. Yuhan
3. Vunan
4. Whvhan

Options :

21052910341. 1
21052910342. 2
21052910343. 3
21052910344. 4

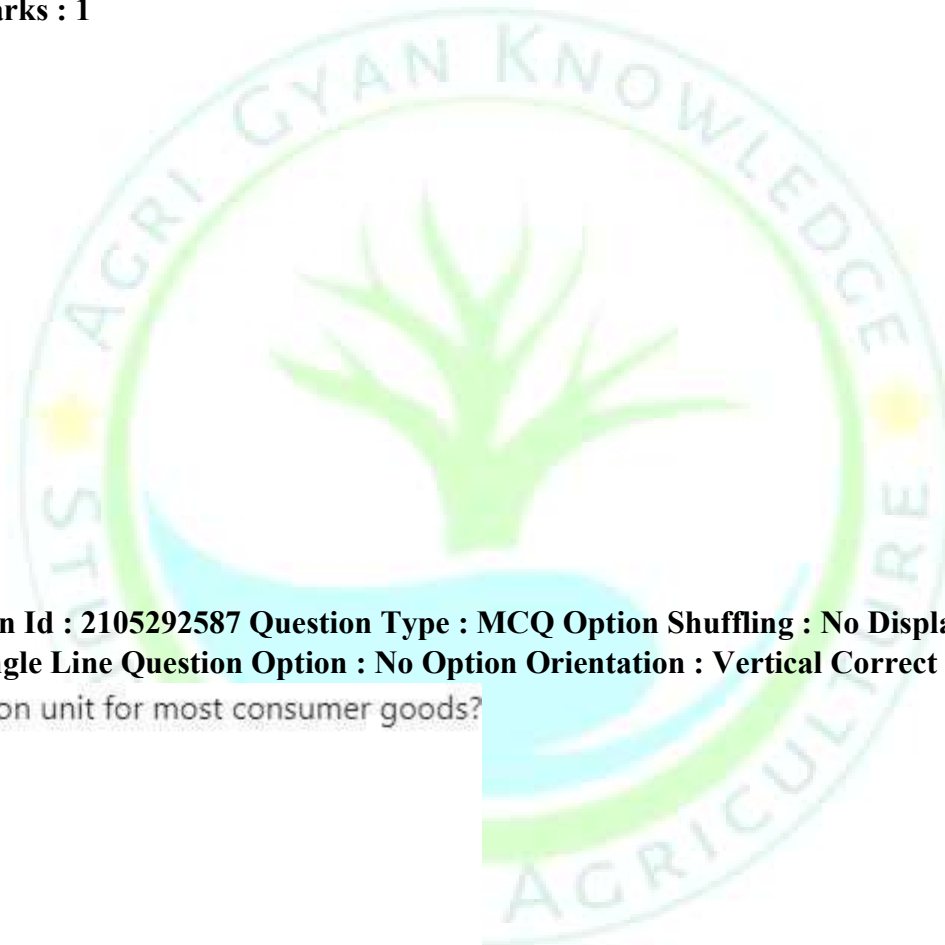
Question Number : 7 Question Id : 2105292587 Question Type : MCQ Option Shuffling : No Display Question Number : Yes Is Question Mandatory : No Single Line Question Option : No Option Orientation : Vertical Correct Marks : 4 Wrong Marks : 1

What is the basic consumption unit for most consumer goods?

1. Organization
2. Individual
3. Unit area
4. Household

Options :

21052910345. 1
21052910346. 2
21052910347. 3



21052910348. 4

Question Number : 8 Question Id : 2105292588 Question Type : MCQ Option Shuffling : No Display Question Number : Yes Is Question Mandatory : No Single Line Question Option : No Option Orientation : Vertical Correct Marks : 4 Wrong Marks : 1

Competency of using knowledge is called

1. Understanding
2. Attitude
3. Skill
4. Extension

Options :

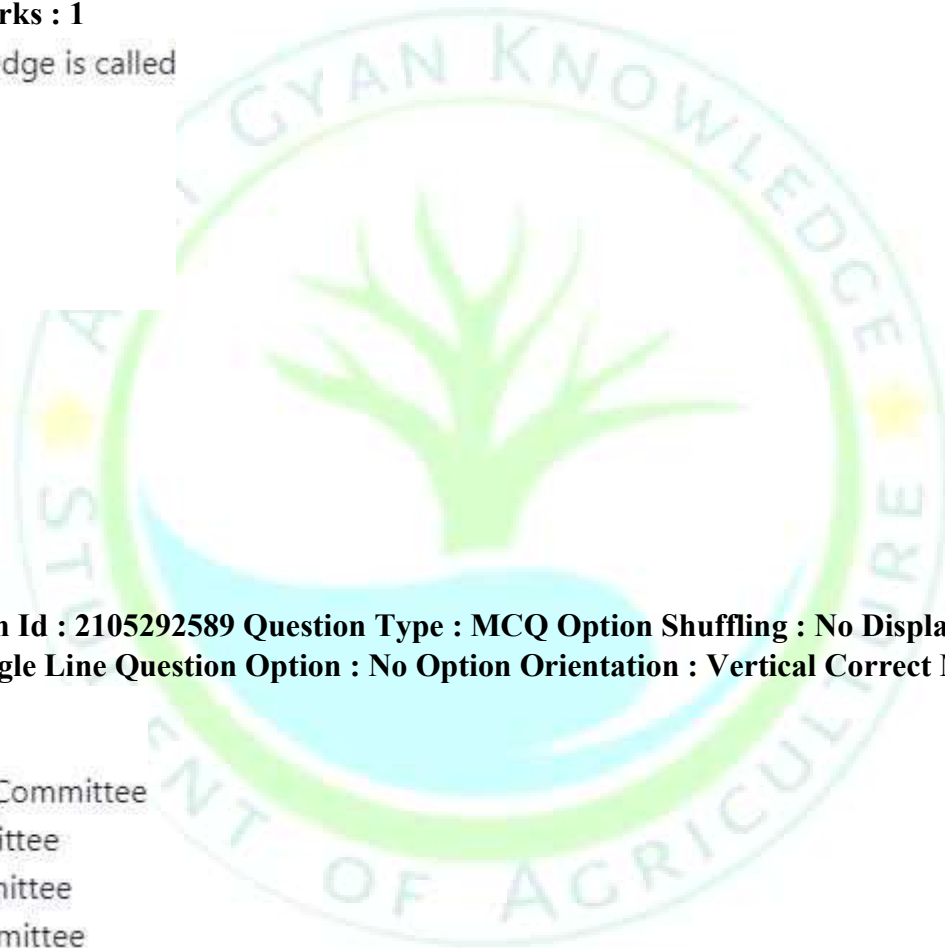
21052910349. 1
21052910350. 2
21052910351. 3
21052910352. 4

Question Number : 9 Question Id : 2105292589 Question Type : MCQ Option Shuffling : No Display Question Number : Yes Is Question Mandatory : No Single Line Question Option : No Option Orientation : Vertical Correct Marks : 4 Wrong Marks : 1
KVK was recommended by

1. Manmohan Singh Mehta Committee
2. Balwant Rai Mehta Committee
3. Ashok Singh Mehta Committee
4. Mohan Singh Mehta Committee

Options :

21052910353. 1
21052910354. 2



21052910355. 3

21052910356. 4

Question Number : 10 Question Id : 2105292590 Question Type : MCQ Option Shuffling : No Display Question Number : Yes Is Question Mandatory : No Single Line Question Option : No Option Orientation : Vertical Correct Marks : 4 Wrong Marks : 1

Group of people living in more or less compact continuous geographical area, having a sense of belonging and meeting their basic needs through a common set of institutions is known as

1. Neighbourhood
2. Society
3. Community
4. Rural society

Options :

21052910357. 1

21052910358. 2

21052910359. 3

21052910360. 4

Question Number : 11 Question Id : 2105292591 Question Type : MCQ Option Shuffling : No Display Question Number : Yes Is Question Mandatory : No Single Line Question Option : No Option Orientation : Vertical Correct Marks : 4 Wrong Marks : 1

Which one of the following minerals is the source of P in soils?

1. Apatite
2. Calcite
3. Gypsum
4. Magnetite

Options :

21052910361. 1

21052910362. 2

21052910363. 3

21052910364. 4

Question Number : 12 Question Id : 2105292592 Question Type : MCQ Option Shuffling : No Display Question Number : Yes Is

Question Mandatory : No Single Line Question Option : No Option Orientation : Vertical

Correct Marks : 4 Wrong Marks : 1

Match **List I** with **List II**

List I	List II
A. Double cropping	I. Growing 2 or more crops simultaneously on the same field
B. Inter cropping	II. Cultivation of crop regrowth after harvest
C. Mixed cropping	III. Growing 2 or more crops simultaneously with no distinct row arrangement
D. Ratoon cropping	IV. Growing 2 crops per year in a sequence

Choose the **correct** answer from the options given below:

1. A - IV, B - III, C - I, D - II
2. A - IV, B - I, C - III, D - II
3. A - II, B - III, C - I, D - IV
4. A - II, B - I, C - III, D - IV

Options :

21052910365. 1

21052910366. 2

21052910367. 3

21052910368. 4

**Question Number : 13 Question Id : 2105292593 Question Type : MCQ Option Shuffling : No Display Question Number : Yes
Is Question Mandatory : No Single Line Question Option : No Option Orientation : Vertical Correct Marks : 4 Wrong Marks : 1**

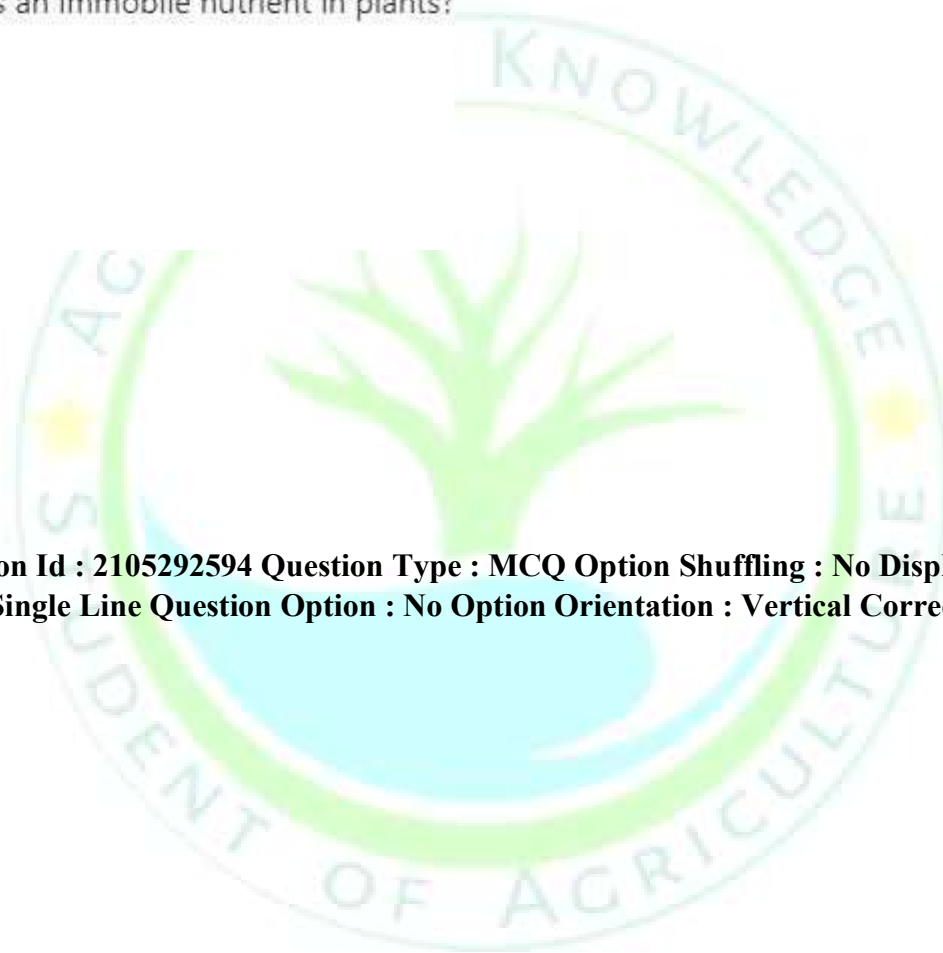
Which one of the following is an immobile nutrient in plants?

1. Nitrogen
2. Potash
3. Calcium
4. Iron

Options :

21052910369. 1
21052910370. 2
21052910371. 3
21052910372. 4

**Question Number : 14 Question Id : 2105292594 Question Type : MCQ Option Shuffling : No Display Question Number : Yes
Is Question Mandatory : No Single Line Question Option : No Option Orientation : Vertical Correct Marks : 4 Wrong Marks : 1**



Fair and remunerative price is followed for which of the following crops?

- A. Cotton
- B. Sugarcane
- C. Onion
- D. Coconut

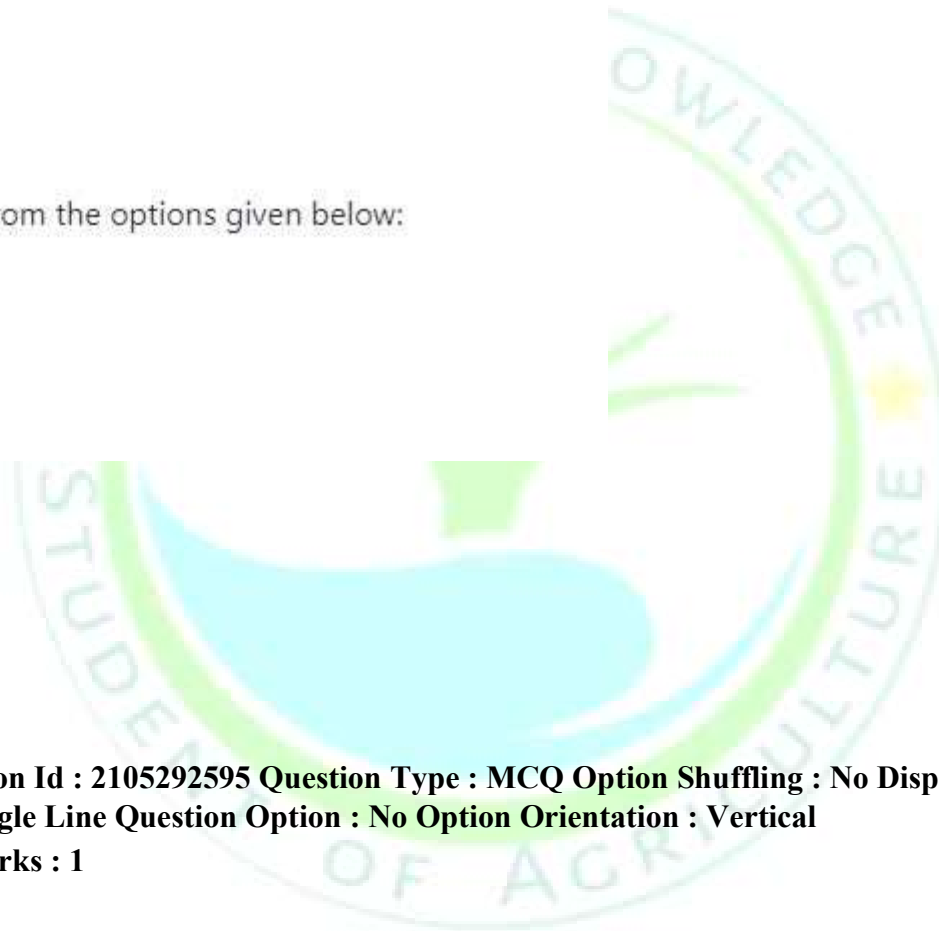
Choose the **correct** answer from the options given below:

- 1. A only
- 2. B only
- 3. A and B only
- 4. A and C only

Options :

- 21052910373. 1
- 21052910374. 2
- 21052910375. 3
- 21052910376. 4

Question Number : 15 Question Id : 2105292595 Question Type : MCQ Option Shuffling : No Display Question Number : Yes Is Question Mandatory : No Single Line Question Option : No Option Orientation : Vertical Correct Marks : 4 Wrong Marks : 1



Galactose is also known as

1. Grape sugar
2. Fruit sugar
3. Brain sugar
4. Malt sugar

Options :

21052910377. 1
21052910378. 2
21052910379. 3
21052910380. 4

**Question Number : 16 Question Id : 2105292596 Question Type : MCQ Option Shuffling : No Display Question Number : Yes
Is Question Mandatory : No Single Line Question Option : No Option Orientation : Vertical Correct Marks : 4 Wrong Marks : 1**

Which one of the following is citrate and water-insoluble P containing fertilizer?

1. DAP
2. SSP
3. Basic slag
4. Rock phosphate

Options :

21052910381. 1
21052910382. 2
21052910383. 3

**Question Type : MCQ Option Shuffling : No Display Question Number : Yes
Is Question Mandatory : No Single Line Question Option : No Option Orientation : Vertical
Correct Marks : 4 Wrong Marks : 1**

Sugarcane crop requires maximum water at

1. Germination stage
2. Maturity stage
3. Grand growth stage
4. All of these

21052910384. 4

Question Number : 17 Question Id : 2105292597

Options :

21052910385. 1
21052910386. 2
21052910387. 3
21052910388. 4

**Question Number : 18 Question Id : 2105292598 Question Type : MCQ Option Shuffling : No Display Question Number : Yes
Is Question Mandatory : No Single Line Question Option : No Option Orientation : Vertical Correct Marks : 4 Wrong Marks : 1**

Major irrigation project covers an area of

1. 1000 Ha
2. >10000 Ha
3. 5000 Ha
4. 200 Ha

Options :

**Question Type : MCQ Option Shuffling : No Display Question Number : Yes
Is Question Mandatory : No Single Line Question Option : No Option Orientation : Vertical
Correct Marks : 4 Wrong Marks : 1**

Area receiving average annual rainfall > 1150 mm are categorized as

1. Dry farming
2. Dry land farming
3. Dry land agriculture
4. Rainfed farming

21052910389. 1

21052910390. 2

21052910391. 3

21052910392. 4

Question Number : 19 Question Id : 2105292599

Options :

21052910393. 1

21052910394. 2

21052910395. 3

21052910396. 4

Question Number : 20 Question Id : 2105292600 Question Type : MCQ Option Shuffling : No Display Question Number : Yes

Is Question Mandatory : No Single Line Question Option : No Option Orientation : Vertical Correct Marks : 4 Wrong Marks : 1

Question Type : MCQ Option Shuffling : No Display Question Number : Yes

Is Question Mandatory : No Single Line Question Option : No Option Orientation : Vertical

Correct Marks : 4 Wrong Marks : 1

In waterlogged soil, the concentration of which one of the following is high?

1. Ethane
2. Methane
3. Carbon dioxide
4. Carbon monoxide

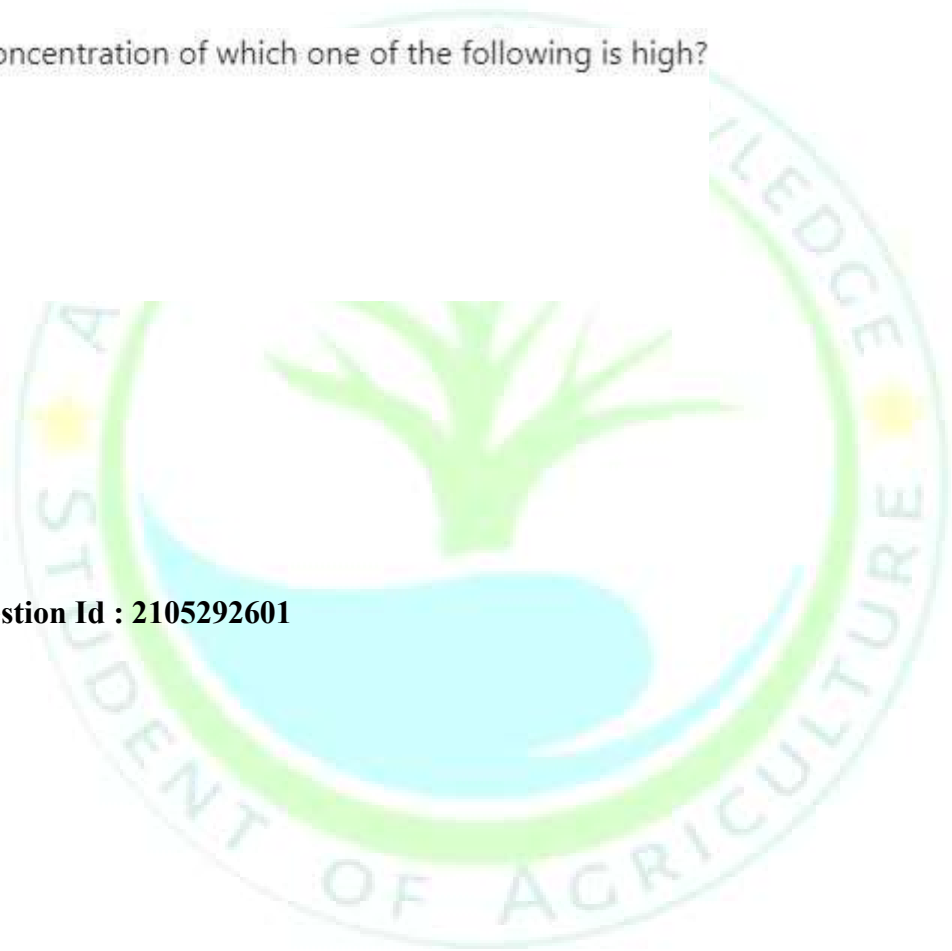
Options :

21052910397. 1
21052910398. 2
21052910399. 3
21052910400. 4

Question Number : 21 Question Id : 2105292601

Options :

21052910401. 1
21052910402. 2
21052910403. 3
21052910404. 4



Question Type : MCQ Option Shuffling : No Display Question Number : Yes

Is Question Mandatory : No Single Line Question Option : No Option Orientation : Vertical

Correct Marks : 4 Wrong Marks : 1

Drip irrigation is most suitable for

1. Acid soil
2. Alkaline soil
3. Saline soil
4. All the above

Question Number : 22 Question Id : 2105292602 Question Type : MCQ Option Shuffling : No Display Question Number : Yes
Is Question Mandatory : No Single Line Question Option : No Option Orientation : Vertical Correct Marks : 4 Wrong Marks : 1

All the grain legumes have a high rate of respiration because of

1. Carbon Mechanism
2. More vegetative growth
3. Semi spreading
4. Pod position

Options :

21052910405. 1
21052910406. 2
21052910407. 3
21052910408. 4

Question Number : 23 Question Id : 2105292603

Question Type : MCQ Option Shuffling : No Display Question Number : Yes
Is Question Mandatory : No Single Line Question Option : No Option Orientation : Vertical
Correct Marks : 4 Wrong Marks : 1

Agriculture growth is very soon likely to be hampered by scarcity of

1. Manmade resources
2. International cooperation
3. Natural resources
4. Local coordination

Options :

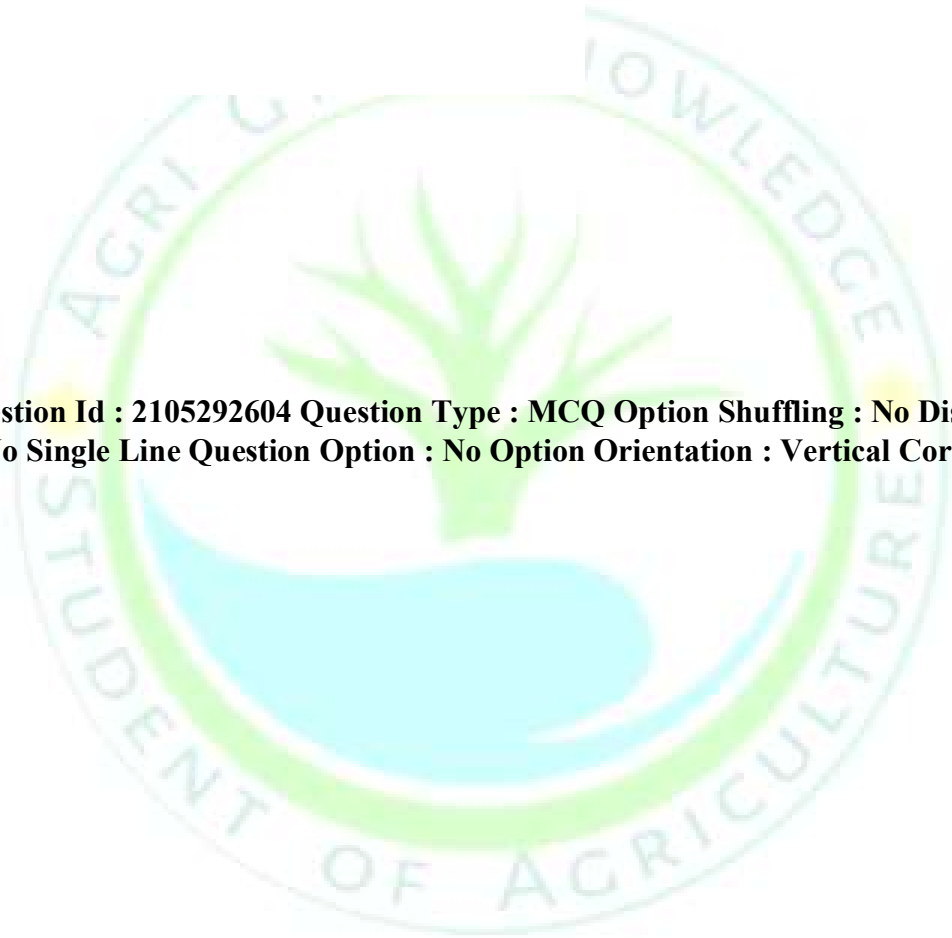
21052910409. 1

21052910410. 2

21052910411. 3

21052910412. 4

**Question Number : 24 Question Id : 2105292604 Question Type : MCQ Option Shuffling : No Display Question Number : Yes
Is Question Mandatory : No Single Line Question Option : No Option Orientation : Vertical Correct Marks : 4 Wrong Marks :
1**



The completely randomized design (CRD) of experimental design involves which of the following principles?

- A. Randomization
- B. Replication
- C. Local control
- D. Homogeneity

Choose the **correct** answer from the options given below:

- 1. A only
- 2. A and B only
- 3. A, B and C only
- 4. A, B, C and D

Options :

- 21052910413. 1
- 21052910414. 2
- 21052910415. 3
- 21052910416. 4

Question Number : 25 Question Id : 2105292605 Question Type : MCQ Option Shuffling : No Display Question Number : Yes Is Question Mandatory : No Single Line Question Option : No Option Orientation : Vertical Correct Marks : 4 Wrong Marks : 1

The optimum number of treatments studied in Latin square design is

1. 2-4
2. 15-20
3. 5-12
4. >20

Options :

21052910417. 1
21052910418. 2
21052910419. 3
21052910420. 4

Question Number : 26 Question Id : 2105292606 Question Type : MCQ Option Shuffling : No Display Question Number : Yes Is Question Mandatory : No Single Line Question Option : No Option Orientation : Vertical Correct Marks : 4 Wrong Marks : 1

Harmonic mean is

1. Reciprocal of average of values of items of a series
2. Reciprocal of average of reciprocal of values of items of a series
3. Average of reciprocal of values of items of a series
4. n^{th} root of the product of values of items of a series

Options :

21052910421. 1
21052910422. 2
21052910423. 3
21052910424. 4

**Question Number : 27 Question Id : 2105292607 Question Type : MCQ Option Shuffling : No Display Question Number : Yes
Is Question Mandatory : No Single Line Question Option : No Option Orientation : Vertical Correct Marks : 4 Wrong Marks : 1**

Integrated fish farming system may be based on which of the following systems?

- A. Agri-aquaculture
- B. Livestock-fish
- C. Multi-utilization
- D. Polyculture

Choose the **correct** answer from the options given below

- 1. A only
- 2. B only
- 3. A and B only
- 4. A, B and C only

Options :

- 21052910425. 1
- 21052910426. 2
- 21052910427. 3
- 21052910428. 4

**Question Number : 28 Question Id : 2105292608 Question Type : MCQ Option Shuffling : No Display Question Number : Yes
Is Question Mandatory : No Single Line Question Option : No Option Orientation : Vertical
Correct Marks : 4 Wrong Marks : 1**

Which one of the following is a double-stranded DNA isometric virus?

1. Cauliflower mosaic virus
2. Tomato mosaic virus
3. Tomato leaf curl virus
4. Potato mosaic virus

Options :

21052910429. 1
21052910430. 2
21052910431. 3
21052910432. 4

**Question Number : 29 Question Id : 2105292609 Question Type : MCQ Option Shuffling : No Display Question Number : Yes
Is Question Mandatory : No Single Line Question Option : No Option Orientation : Vertical Correct Marks : 4 Wrong Marks : 1**

The process of leaving off the colony by the queen is known as

1. Absconding
2. Swarming
3. Supersedure
4. Queen excluder

Options :

21052910433. 1
21052910434. 2
21052910435. 3

**Question Type : MCQ Option Shuffling : No Display Question Number : Yes
Is Question Mandatory : No Single Line Question Option : No Option Orientation : Vertical
Correct Marks : 4 Wrong Marks : 1**

Botanical name of Lucerne is

1. *Medicago saliva*
2. *Medicago sativa*
3. *Medicago stevia*
4. *Medicago selvena*

21052910436. 4

Question Number : 30 Question Id : 2105292610

Options :

21052910437. 1
21052910438. 2
21052910439. 3
21052910440. 4

**Question Number : 31 Question Id : 2105292611 Question Type : MCQ Option Shuffling : No Display Question Number : Yes
Is Question Mandatory : No Single Line Question Option : No Option Orientation : Vertical Correct Marks : 4 Wrong Marks : 1**

Which one of the following fuels can be produced by trans esterification of Jatropha oil?

1. Ethanol
2. Biogas
3. Petroleum gas
4. Bio-diesel

Options :

**Question Type : MCQ Option Shuffling : No Display Question Number : Yes
Is Question Mandatory : No Single Line Question Option : No Option Orientation : Vertical
Correct Marks : 4 Wrong Marks : 1**

Solar energy can be converted directly into electric energy with the help of

1. Photovoltaic cells
2. Dry cell
3. Rechargeable cell
4. Battery

21052910441. 1

21052910442. 2

21052910443. 3

21052910444. 4

Question Number : 32 Question Id : 2105292612

Options :

21052910445. 1

21052910446. 2

21052910447. 3

21052910448. 4

**Question Number : 33 Question Id : 2105292613 Question Type : MCQ Option Shuffling : No Display Question Number : Yes
Is Question Mandatory : No Single Line Question Option : No Option Orientation : Vertical Correct Marks : 4 Wrong Marks : 1**

**Question Type : MCQ Option Shuffling : No Display Question Number : Yes
Is Question Mandatory : No Single Line Question Option : No Option Orientation : Vertical
Correct Marks : 4 Wrong Marks : 1**

The unit of energy is

1. Pascal
2. Joule
3. Kilo watt
4. Richter

Options :

21052910449. 1
21052910450. 2
21052910451. 3
21052910452. 4

Question Number : 34 Question Id : 2105292614

Options :

21052910453. 1
21052910454. 2
21052910455. 3
21052910456. 4



Question Type : MCQ Option Shuffling : No Display Question Number : Yes

Is Question Mandatory : No Single Line Question Option : No Option Orientation : Vertical

Correct Marks : 4 Wrong Marks : 1

At farms, the self-propelled power unit is

1. Tractor
2. Harrow
3. Indigenous plough
4. Rotavator

Question Number : 35 Question Id : 2105292615 Question Type : MCQ Option Shuffling : No Display Question Number : Yes
Is Question Mandatory : No Single Line Question Option : No Option Orientation : Vertical Correct Marks : 4 Wrong Marks : 1

M.B. Plough is used as

1. Secondary tillage
2. Inter culturing
3. Primary tillage
4. Any other tillage implement

Options :

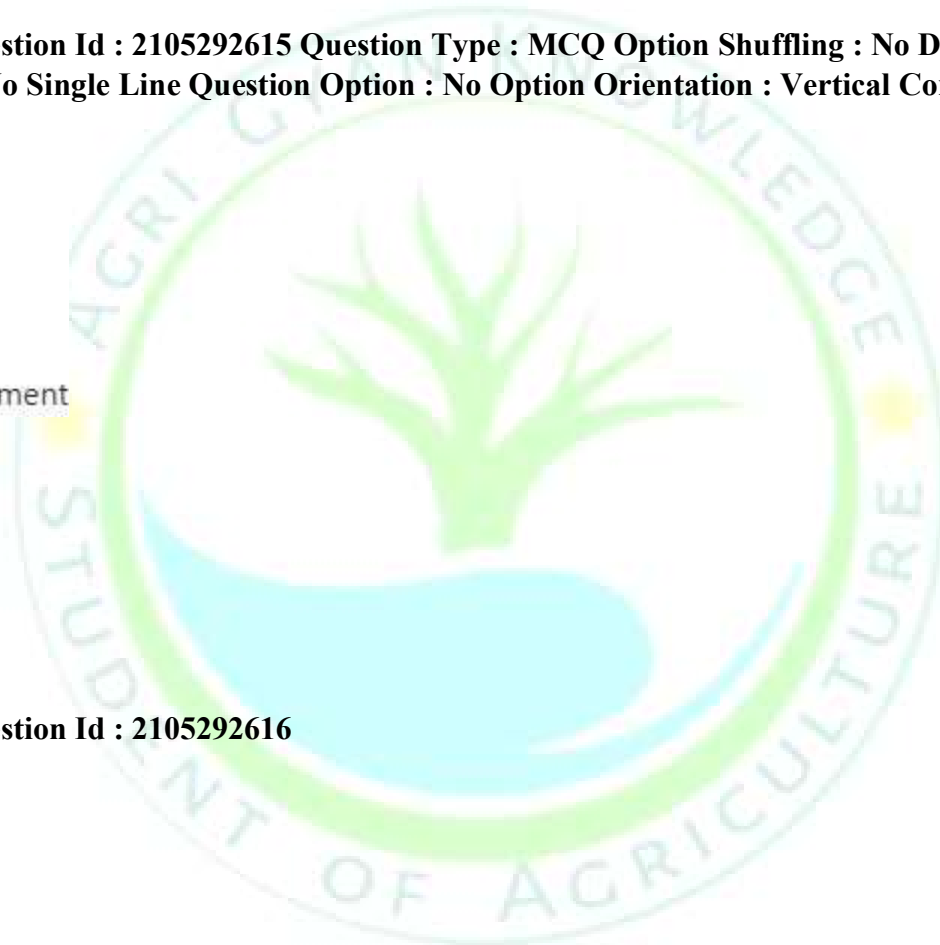
21052910457. 1
21052910458. 2
21052910459. 3
21052910460. 4

Question Number : 36 Question Id : 2105292616

Options :

21052910461. 1
21052910462. 2

Question Type : MCQ Option Shuffling : No Display Question Number : Yes
Is Question Mandatory : No Single Line Question Option : No Option Orientation : Vertical
Correct Marks : 4 Wrong Marks : 1



At a standard pressure and temperature, the weight per unit volume of the grain is known as

1. Mass
2. Density
3. Volume
4. Specific gravity

21052910463. 3

21052910464. 4

**Question Number : 37 Question Id : 2105292617 Question Type : MCQ Option Shuffling : No Display Question Number : Yes
Is Question Mandatory : No Single Line Question Option : No Option Orientation : Vertical Correct Marks : 4 Wrong Marks : 1**

Crop drying refers to the removal of moisture by

1. Condensation
2. Sublimation
3. Transpiration
4. Evaporation

Options :

21052910465. 1

21052910466. 2

21052910467. 3

21052910468. 4

Question Number : 38 Question Id : 2105292618

**Question Type : MCQ Option Shuffling : No Display Question Number : Yes
Is Question Mandatory : No Single Line Question Option : No Option Orientation : Vertical
Correct Marks : 4 Wrong Marks : 1**

Terracing is an effective method of soil conservation in

1. Desert areas
2. Plain areas
3. Hilly areas
4. Riverine areas

Options :

21052910469. 1
21052910470. 2
21052910471. 3
21052910472. 4

**Question Number : 39 Question Id : 2105292619 Question Type : MCQ Option Shuffling : No Display Question Number : Yes
Is Question Mandatory : No Single Line Question Option : No Option Orientation : Vertical Correct Marks : 4 Wrong Marks : 1**

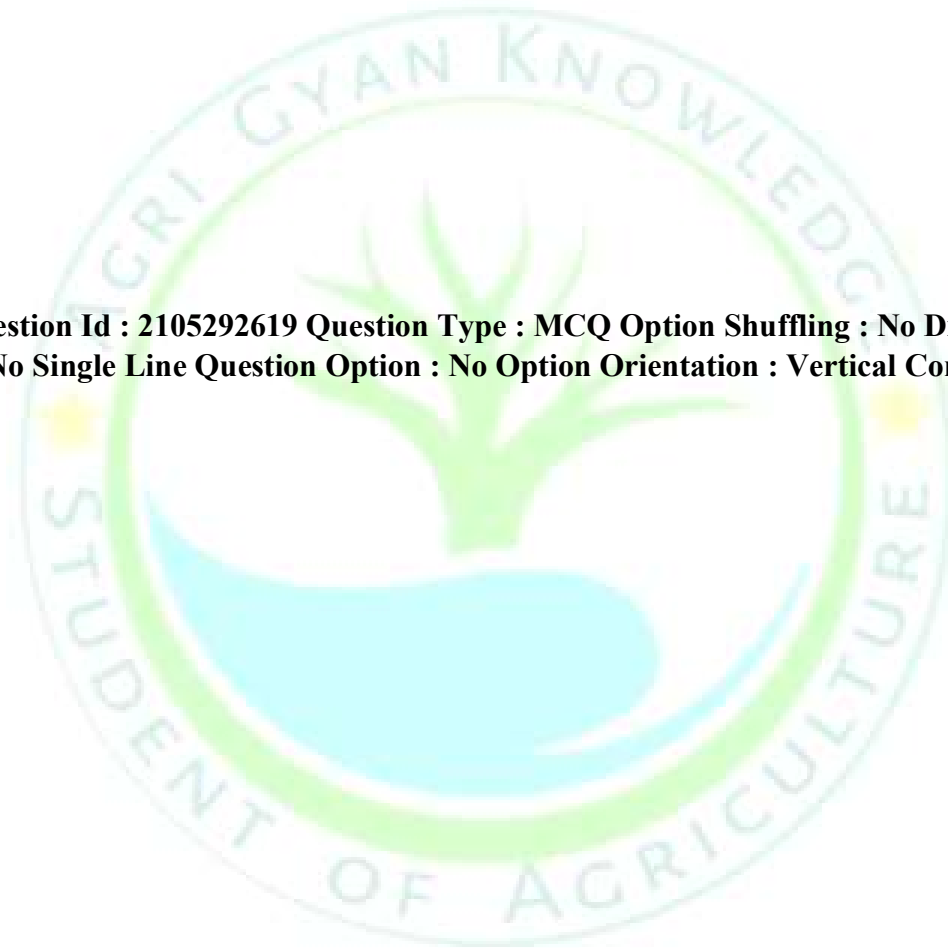
FMD is caused by

1. Bacteria
2. Virus
3. Fungi
4. Protozoa

Options :


21052910473. 1
21052910474. 2
21052910475. 3

**Question Type : MCQ Option Shuffling : No Display Question Number : Yes
Is Question Mandatory : No Single Line Question Option : No Option Orientation : Vertical
Correct Marks : 4 Wrong Marks : 1**



21052910476. 4

Question Number : 40 Question Id : 2105292620



Question Type : MCQ Option Shuffling : No Display Question Number : Yes

Is Question Mandatory : No Single Line Question Option : No Option Orientation : Vertical

Correct Marks : 4 Wrong Marks : 1

Sertoli cell tumor of the testes in dog secretes

1. Testosterone
2. Estrogen
3. Androgen
4. Prolactin

Options :

21052910477. 1
21052910478. 2
21052910479. 3
21052910480. 4

Question Number : 41 Question Id : 2105292621 Question Type : MCQ Option Shuffling : No Display Question Number : Yes Is Question Mandatory : No Single Line Question Option : No Option Orientation : Vertical Correct Marks : 4 Wrong Marks : 1

The viral agent which produces diphagic fever, respiratory distress, nervous symptoms and hard pad diseases in dog is

1. Canine distemper virus
2. ICH virus
3. Rabies virus
4. IBH virus

Options :

21052910481. 1
21052910482. 2
21052910483. 3
21052910484. 4

Question Number : 42 Question Id : 2105292622 Question Type : MCQ Option Shuffling : No Display Question Number : Yes Is Question Mandatory : No Single Line Question Option : No Option Orientation : Vertical

Which of these is/are NOT the bacterial zoonosis?

1. Brucellosis
2. Leptospirosis
3. Listeriosis
4. All of these

Correct Marks : 4 Wrong Marks : 1

Options :

21052910485. 1
21052910486. 2
21052910487. 3
21052910488. 4

**Question Number : 43 Question Id : 2105292623 Question Type : MCQ Option Shuffling : No Display Question Number : Yes
Is Question Mandatory : No Single Line Question Option : No Option Orientation : Vertical Correct Marks : 4 Wrong Marks : 1**

Foul smelling diarrhoea containing fat is called as

1. Ceratorrhea
2. Steatorrhea
3. Steatitis
4. Keratitis

Options :

21052910489. 1
21052910490. 2
21052910491. 3
21052910492. 4

**Question Type : MCQ Option Shuffling : No Display Question Number : Yes
Is Question Mandatory : No Single Line Question Option : No Option Orientation : Vertical
Correct Marks : 4 Wrong Marks : 1**

Gradual decrease in response, on repeated administration of drug is called

1. Tolerance
2. Tachyphylaxis
3. Desensitization
4. Withdrawal syndrome

Question Number : 44 Question Id : 2105292624

Options :

21052910493. 1
21052910494. 2
21052910495. 3
21052910496. 4

**Question Number : 45 Question Id : 2105292625 Question Type : MCQ Option Shuffling : No Display Question Number : Yes
Is Question Mandatory : No Single Line Question Option : No Option Orientation : Vertical Correct Marks : 4 Wrong Marks : 1**

Yellow fever is transmitted by

1. *Aedes aegypti*
2. Argus
3. *Ixodes scapularis*
4. Simules

Options :

21052910497. 1
21052910498. 2
21052910499. 3
21052910500. 4

**Question Type : MCQ Option Shuffling : No Display Question Number : Yes
Is Question Mandatory : No Single Line Question Option : No Option Orientation : Vertical
Correct Marks : 4 Wrong Marks : 1**

The best method to study growth and development of child is

1. Psychoanalytic method
2. Comparative method
3. Developmental method
4. Statistical method

Question Number : 46 Question Id : 2105292626

Options :

21052910501. 1
21052910502. 2
21052910503. 3
21052910504. 4

**Question Number : 47 Question Id : 2105292627 Question Type : MCQ Option Shuffling : No Display Question Number : Yes
Is Question Mandatory : No Single Line Question Option : No Option Orientation : Vertical Correct Marks : 4 Wrong Marks : 1**

The use of food additives is controlled by

1. Delaney clause
2. Delaware clause
3. Additive rule
4. Supplementary regulatory norms

Options :

21052910505. 1
21052910506. 2
21052910507. 3
21052910508. 4

**Question Type : MCQ Option Shuffling : No Display Question Number : Yes
Is Question Mandatory : No Single Line Question Option : No Option Orientation : Vertical
Correct Marks : 4 Wrong Marks : 1**

Which one of the following is NOT an element of intellectual development?

1. Creativity
2. Tolerance
3. Thinking
4. Imagination

Question Number : 48 Question Id : 2105292628

Options :

21052910509. 1
21052910510. 2
21052910511. 3
21052910512. 4

**Question Number : 49 Question Id : 2105292629 Question Type : MCQ Option Shuffling : No Display Question Number : Yes
Is Question Mandatory : No Single Line Question Option : No Option Orientation : Vertical Correct Marks : 4 Wrong Marks : 1**

The science and art of growing grapes for wine is called

1. Vinification
2. Viniculture
3. Viticulture
4. Vineyard

Options :

21052910513. 1
21052910514. 2
21052910515. 3
21052910516. 4

**Question Type : MCQ Option Shuffling : No Display Question Number : Yes
Is Question Mandatory : No Single Line Question Option : No Option Orientation : Vertical
Correct Marks : 4 Wrong Marks : 1**

Question Number : 50 Question Id : 2105292630



Question Type : MCQ Option Shuffling : No Display Question Number : Yes
Is Question Mandatory : No Single Line Question Option : No Option Orientation : Vertical
Correct Marks : 4 Wrong Marks : 1

Identify the missing number

2, 6, 12, 20, 30, 42, 56, (____)

1. 60
2. 64
3. 72
4. 70

Options :

21052910517. 1
21052910518. 2
21052910519. 3
21052910520. 4

**Question Number : 51 Question Id : 2105292631 Question Type : MCQ Option Shuffling : No Display Question Number : Yes
Is Question Mandatory : No Single Line Question Option : No Option Orientation : Vertical Correct Marks : 4 Wrong Marks : 1**

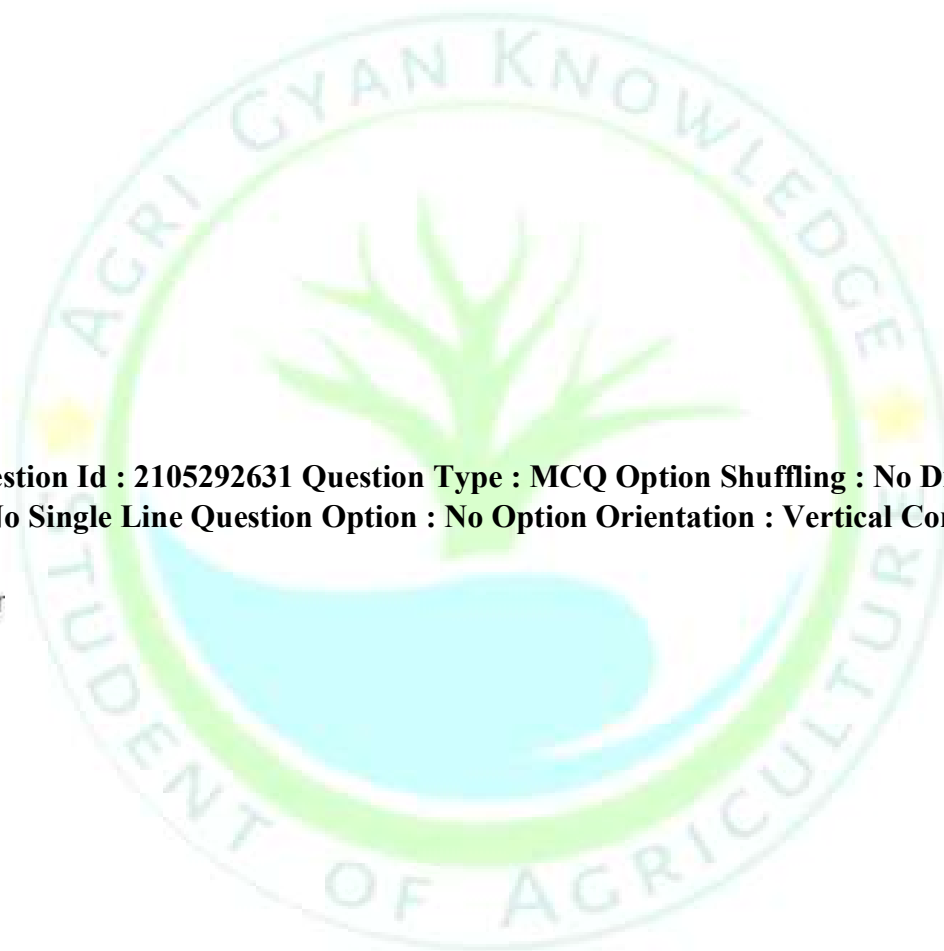
Insert the missing number

2, 4, 12, 48, 240, (____)

1. 960
2. 1440
3. 1080
4. 1920

Options :

21052910521. 1
21052910522. 2
21052910523. 3



21052910524. 4

Question Number : 52 Question Id : 2105292632 Question Type : MCQ Option Shuffling : No Display Question Number : Yes
Is Question Mandatory : No Single Line Question Option : No Option Orientation : Vertical
Correct Marks : 4 Wrong Marks : 1

The average collection in a cinema hall in a week was Rs. 8,224. The average collection in six days except Friday is Rs.8,094. What was the collection on Friday?

1. Rs. 9,100
2. Rs. 9,004
3. Rs. 8,012
4. Rs. 8,004

Options :

21052910525. 1
21052910526. 2
21052910527. 3
21052910528. 4

Question Number : 53 Question Id : 2105292633 Question Type : MCQ Option Shuffling : No Display Question Number : Yes
Is Question Mandatory : No Single Line Question Option : No Option Orientation : Vertical Correct Marks : 4 Wrong Marks : 1

Question Type : MCQ Option Shuffling : No Display Question Number : Yes
Is Question Mandatory : No Single Line Question Option : No Option Orientation : Vertical
Correct Marks : 4 Wrong Marks : 1

The average of 7 consecutive numbers is 20. The largest of these numbers is

- 1. 24
- 2. 20
- 3. 23
- 4. 22

Options :

- 21052910529. 1
- 21052910530. 2
- 21052910531. 3
- 21052910532. 4

**Question Number : 54 Question Id : 2105292634 Question Type : MCQ Option Shuffling : No Display Question Number : Yes
Is Question Mandatory : No Single Line Question Option : No Option Orientation : Vertical
Correct Marks : 4 Wrong Marks : 1**

In an examinations 42% students failed in English and 52% failed in Mathematics. If 17% failed in both the subjects, the percentage of those who passed in both the subjects is

- 1. 40%
- 2. 27%
- 3. 34%
- 4. 23%

Options :

- 21052910533. 1
- 21052910534. 2
- 21052910535. 3
- 21052910536. 4

Question Number : 55 Question Id : 2105292635 Question Type : MCQ Option Shuffling : No Display Question Number : Yes
Is Question Mandatory : No Single Line Question Option : No Option Orientation : Vertical Correct Marks : 4 Wrong Marks : 1

Due to an increase of 30% in the price of eggs, 3 eggs less are available for Rs. 7.80. The present rate of eggs per dozen is:

1. Rs. 8.64
2. Rs. 8.88
3. Rs. 9.36
4. Rs. 10.40

Options :

21052910537. 1
21052910538. 2
21052910539. 3
21052910540. 4

Question Number : 56 Question Id : 2105292636

A sum of money at simple interest doubles in 7 years. It will become four times in

1. 18 years
2. 21 years
3. 38 years
4. 42 years

Options :

21052910541. 1
21052910542. 2

Question Type : MCQ Option Shuffling : No Display Question Number : Yes
Is Question Mandatory : No Single Line Question Option : No Option Orientation : Vertical
Correct Marks : 4 Wrong Marks : 1

21052910543. 3

21052910544. 4

**Question Number : 57 Question Id : 2105292637 Question Type : MCQ Option Shuffling : No Display Question Number : Yes
Is Question Mandatory : No Single Line Question Option : No Option Orientation : Vertical Correct Marks : 4 Wrong Marks : 1**

A man performs $\frac{2}{15}$ of the total journey by rail, $\frac{9}{20}$ by bus and remaining 10 km on the cycle. His total journey is

1. 31.2 km
2. 38.4 km
3. 32.8 km
4. 24 km

Options :

21052910545. 1

21052910546. 2

21052910547. 3

21052910548. 4

**Question Number : 58 Question Id : 2105292638 Question Type : MCQ Option Shuffling : No Display Question Number : Yes
Is Question Mandatory : No Single Line Question Option : No Option Orientation : Vertical
Correct Marks : 4 Wrong Marks : 1**

A certain number of men can do a work in 60 days. If there were 8 men more, it could be finished in 10 days less. How many men are there?

1. 27
2. 35
3. 45
4. 40

Options :

- 21052910549. 1
- 21052910550. 2
- 21052910551. 3
- 21052910552. 4

Question Number : 59 Question Id : 2105292639 Question Type : MCQ Option Shuffling : No Display Question Number : Yes Is Question Mandatory : No Single Line Question Option : No Option Orientation : Vertical Correct Marks : 4 Wrong Marks : 1

A pipe can fill a cistern in 12 hours, while another pipe can empty it in 18 hours. If both the pipes are opened simultaneously, in how many hours the cistern will be filled?

- 1. 24 hours
- 2. 36 hours
- 3. 30 hours
- 4. 27 hours

Options :

- 21052910553. 1
- 21052910554. 2
- 21052910555. 3
- 21052910556. 4

Question Number : 60 Question Id : 2105292640

Question Type : MCQ Option Shuffling : No Display Question Number : Yes Is Question Mandatory : No Single Line Question Option : No Option Orientation : Vertical Correct Marks : 4 Wrong Marks : 1

If the sum of two numbers is 14 and their difference is 10, find the product of these two numbers

- 1. 18
- 2. 20
- 3. 24
- 4. 22

Options :

- 21052910557. 1
- 21052910558. 2
- 21052910559. 3
- 21052910560. 4

Question Number : 61 Question Id : 2105292641 Question Type : MCQ Option Shuffling : No Display Question Number : Yes Is Question Mandatory : No Single Line Question Option : No Option Orientation : Vertical Correct Marks : 4 Wrong Marks : 1

The sum of three consecutive odd natural number is 87. The smallest of these number is

- 1. 29
- 2. 31
- 3. 23
- 4. 27

Options :

- 21052910561. 1
- 21052910562. 2
- 21052910563. 3
- 21052910564. 4

Question Number : 62 Question Id : 2105292642 Question Type : MCQ Option Shuffling : No Display Question Number : Yes
Is Question Mandatory : No Single Line Question Option : No Option Orientation : Vertical
Correct Marks : 4 Wrong Marks : 1

Rakesh invests a certain sum at a certain rate with simple interest for 4 years. Had he invested it at 2% higher, he would have earned Rs.240 more. Find the sum he invested

1. Rs. 1800
2. Rs. 2400
3. Rs. 3000
4. Rs. 3600

Options :

21052910565. 1
21052910566. 2
21052910567. 3
21052910568. 4

Question Number : 63 Question Id : 2105292643 Question Type : MCQ Option Shuffling : No Display Question Number : Yes
Is Question Mandatory : No Single Line Question Option : No Option Orientation : Vertical Correct Marks : 4 Wrong Marks : 1

A sum of Rs.1600 gives a simple interest of Rs. 252 in 2 years and 3 months. The rate of Interest per annum is

1. 5.5%
2. 8%
3. 7%
4. 6%

Question Type : MCQ Option Shuffling : No Display Question Number : Yes
Is Question Mandatory : No Single Line Question Option : No Option Orientation : Vertical
Correct Marks : 4 Wrong Marks : 1

Options :

- 21052910569. 1
- 21052910570. 2
- 21052910571. 3
- 21052910572. 4

Question Number : 64 Question Id : 2105292644

The length of a rectangle is 16 cm which is 2 cm more than the diameter of a circle. What is the area of the circle?

- 1. 154 sq. cm
- 2. 176 sq.cm
- 3. 112 sq.cm
- 4. 136 sq.cm

Options :

- 21052910573. 1
- 21052910574. 2
- 21052910575. 3
- 21052910576. 4

Question Number : 65 Question Id : 2105292645 Question Type : MCQ Option Shuffling : No Display Question Number : Yes Is Question Mandatory : No Single Line Question Option : No Option Orientation : Vertical Correct Marks : 4 Wrong Marks : 1

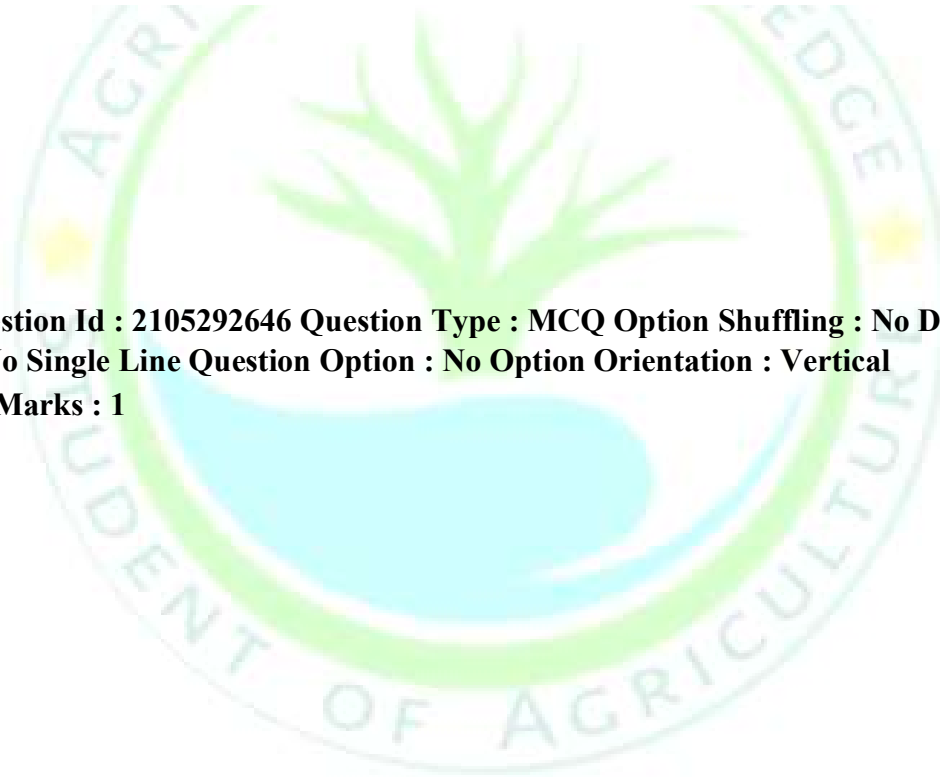
Find the cost of carpeting a room 13 m long and 9 m broad with a carpet 75 cm wide at the value of Rs. 12.40 per square meter.

1. Rs. 1834.60
2. Rs. 1680.60
3. Rs. 1240.60
4. Rs. 1934.40

Options :

21052910577. 1
21052910578. 2
21052910579. 3
21052910580. 4

**Question Number : 66 Question Id : 2105292646 Question Type : MCQ Option Shuffling : No Display Question Number : Yes
Is Question Mandatory : No Single Line Question Option : No Option Orientation : Vertical
Correct Marks : 4 Wrong Marks : 1**



**Question Type : MCQ Option Shuffling : No Display Question Number : Yes
Is Question Mandatory : No Single Line Question Option : No Option Orientation : Vertical
Correct Marks : 4 Wrong Marks : 1**

The surface area of a cube is 1734 sq.cm. Find its volume.

1. 5113 cm³
2. 4913 cm³
3. 5913 cm³
4. 6113 cm³

Options :

21052910581. 1
21052910582. 2
21052910583. 3
21052910584. 4

Question Number : 67 Question Id : 2105292647 Question Type : MCQ Option Shuffling : No Display Question Number : Yes Is Question Mandatory : No Single Line Question Option : No Option Orientation : Vertical Correct Marks : 4 Wrong Marks : 1

A rectangular water tank is 8m high, 6m long and 2.5m wide. How many liters of water can it hold?

1. 120
2. 1200
3. 12000
4. 120000

Options :

21052910585. 1
21052910586. 2
21052910587. 3
21052910588. 4

Question Number : 68 Question Id : 2105292648 Question Type : MCQ Option Shuffling : No Display Question Number : Yes Is Question Mandatory : No Single Line Question Option : No Option Orientation : Vertical Correct Marks : 4 Wrong Marks : 1

Find out the wrong number in the sequence

1, 8, 27, 64, 124, 216, 343

1. 8
2. 64
3. 27
4. 124

Options :

21052910589. 1
21052910590. 2
21052910591. 3
21052910592. 4

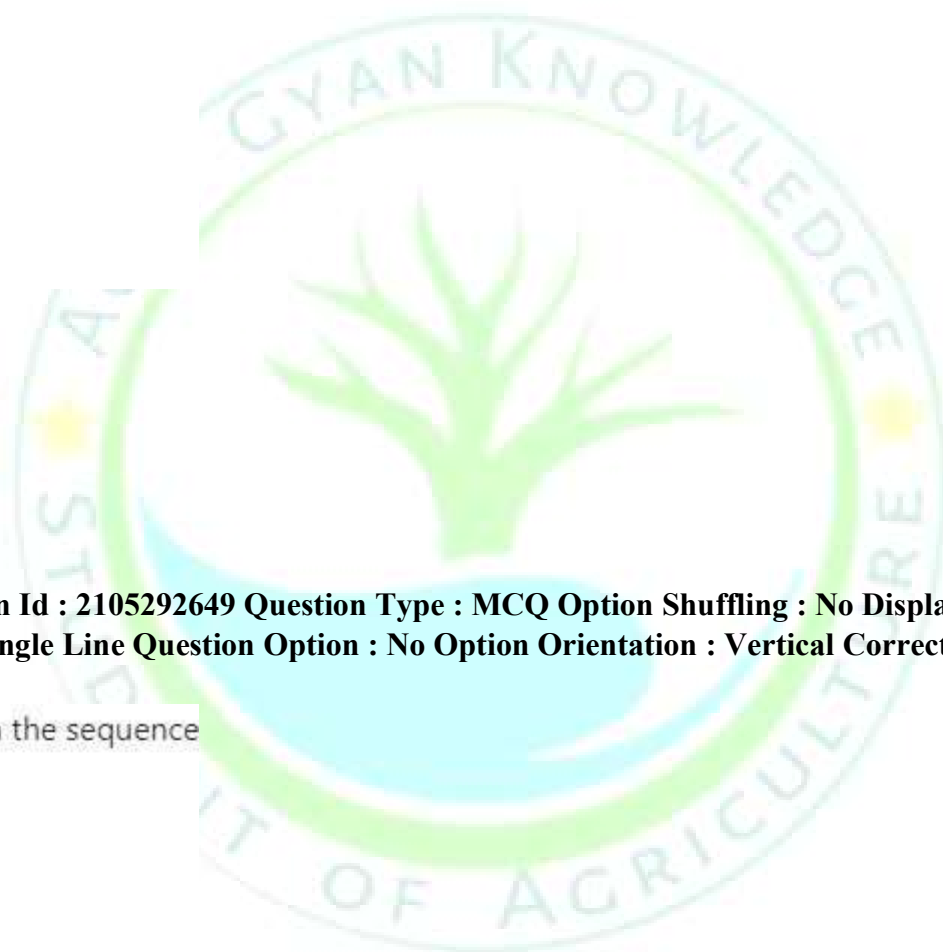
Question Number : 69 Question Id : 2105292649 Question Type : MCQ Option Shuffling : No Display Question Number : Yes Is Question Mandatory : No Single Line Question Option : No Option Orientation : Vertical Correct Marks : 4 Wrong Marks : 1

Find out the wrong number in the sequence

25, 36, 49, 81, 121, 169, 225

1. 36
2. 49
3. 121
4. 169

Options :



21052910593. 1

21052910594. 2

21052910595. 3

21052910596. 4

Sub-Section Number :

2

Sub-Section Id :

21052927

Question Shuffling Allowed :

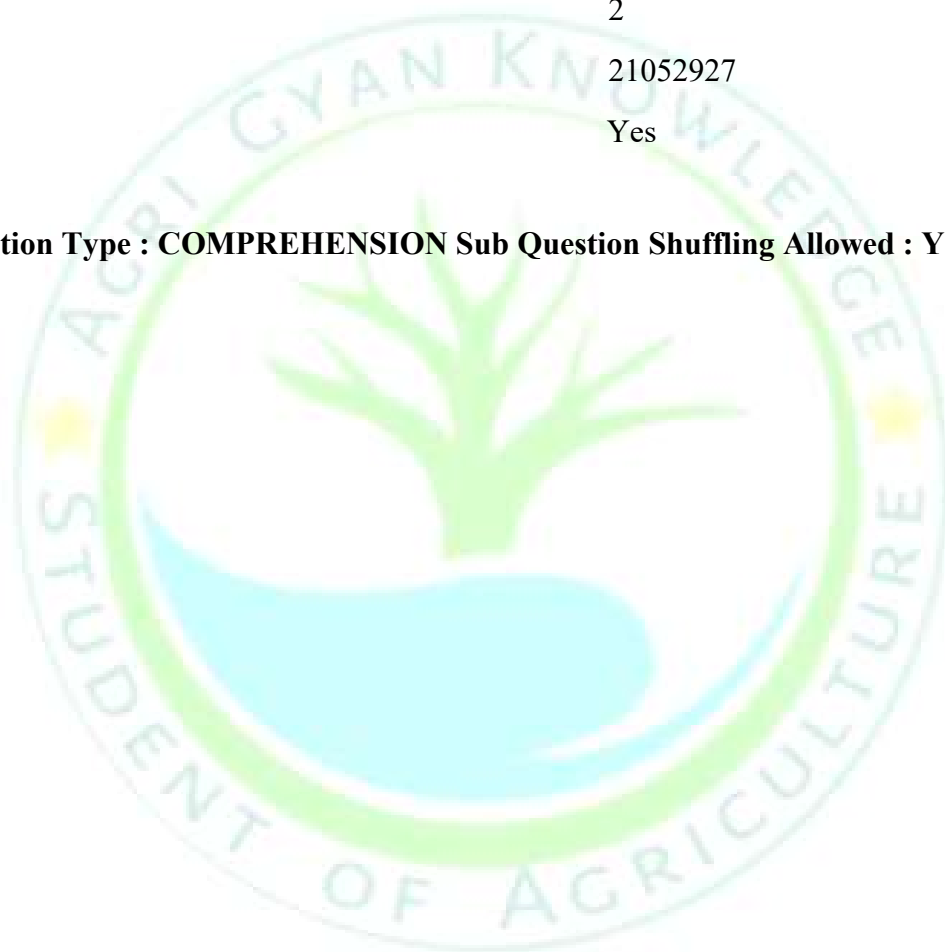
Yes

Question Id : 2105292650 Question Type : COMPREHENSION Sub Question Shuffling Allowed : Yes Group Comprehension Questions

: No

Question Numbers : (70 to 74)

Question Label : Comprehension



The table given here shows the production of five types of tractors by a company in the year 2012 to 2017. Study the table and answer the questions that follow

Table: Production of Tractors by a Company

Company/Year	2012	2013	2014	2015	2016	2017	Total
A	8	20	16	17	21	6	88
B	16	10	14	12	12	14	78
C	21	17	16	15	13	8	90
D	4	6	10	16	20	31	87
E	25	18	19	30	14	27	133
Total	74	71	75	90	80	86	476

Sub questions

Question Number : 70 Question Id : 2105292651 Question Type : MCQ Option Shuffling : No Display Question Number : Yes Is
Question Mandatory : No Single Line Question Option : No Option Orientation : Vertical
Correct Marks : 4 Wrong Marks : 1

In which year the production of tractors of all types taken together was approximately equal to the average of the total production during the period?

1. 2012
2. 2014
3. 2016
4. 2017

Options :

21052910597. 1
21052910598. 2
21052910599. 3
21052910600. 4

Question Number : 71 Question Id : 2105292652 Question Type : MCQ Option Shuffling : No Display Question Number : Yes Is Question Mandatory : No Single Line Question Option : No Option Orientation : Vertical Correct Marks : 4 Wrong Marks : 1

In which year the total production of tractors of types A and B together was equal to the total production of tractors of types C and D together?

1. 2013
2. 2014
3. 2017
4. None of these

Options :

21052910601. 1
21052910602. 2
21052910603. 3
21052910604. 4

Question Number : 72 Question Id : 2105292653 Question Type : MCQ Option Shuffling : No Display Question Number : Yes Is Question Mandatory : No Single Line Question Option : No Option Orientation : Vertical Correct Marks : 4 Wrong Marks : 1

During the period 2012-2017, in which type of tractors was there a continuous increase in production?

1. A
2. B
3. C
4. D

Options :

- 21052910605. 1
- 21052910606. 2
- 21052910607. 3
- 21052910608. 4

Question Number : 73 Question Id : 2105292654 Question Type : MCQ Option Shuffling : No Display Question Number : Yes Is Question Mandatory : No Single Line Question Option : No Option Orientation : Vertical Correct Marks : 4 Wrong Marks : 1

The production of which type of tractors was 25% of the total production of all types of tractors during 2016?

1. D
2. C
3. B
4. A

Options :

- 21052910609. 1
- 21052910610. 2

21052910611. 3

21052910612. 4

Question Number : 74 Question Id : 2105292655 Question Type : MCQ Option Shuffling : No Display Question Number : Yes Is Question Mandatory : No Single Line Question Option : No Option Orientation : Vertical Correct Marks : 4 Wrong Marks : 1

The percent increase in total production of all types of tractors in 2015 to that in 2014 was

1. 15
2. 25
3. 20
4. 30

Options :

21052910613. 1

21052910614. 2

21052910615. 3

21052910616. 4

Sub-Section Number :

3

Sub-Section Id :

21052928

Question Shuffling Allowed :

Yes

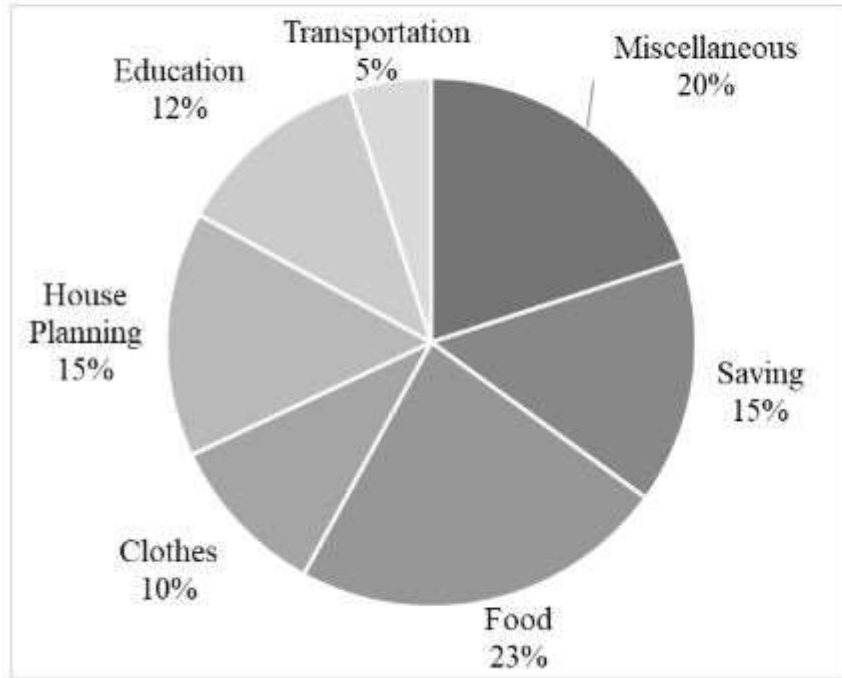
Question Id : 2105292656 Question Type : COMPREHENSION Sub Question Shuffling Allowed : Yes Group Comprehension Questions

: No

Question Numbers : (75 to 79)

Question Label : Comprehension

The given pie chart shows the spending by a family on various items during the year 2001. Study the graph and answer the questions that follow



Sub questions

Question Number : 75 Question Id : 2105292657 Question Type : MCQ Option Shuffling : No Display Question Number : Yes
Is Question Mandatory : No Single Line Question Option : No Option Orientation : Vertical Correct Marks : 4 Wrong Marks : 1

If the total amount spent during the year 2001 was Rs. 46000, the amount spent on food was

1. Rs. 2,000
2. Rs. 10,580
3. Rs. 23,000
4. Rs. 2,300

Options :

21052910617. 1
21052910618. 2
21052910619. 3
21052910620. 4

Question Number : 76 Question Id : 2105292658 Question Type : MCQ Option Shuffling : No Display Question Number : Yes Is Question Mandatory : No Single Line Question Option : No Option Orientation : Vertical Correct Marks : 4 Wrong Marks : 1

If total amount spent was Rs. 46000, how much was spent on clothing and housing together?

1. Rs. 11,500
2. Rs. 1,150
3. Rs. 10,000
4. Rs. 15,000

Options :

21052910621. 1
21052910622. 2
21052910623. 3
21052910624. 4

Question Number : 77 Question Id : 2105292659 Question Type : MCQ Option Shuffling : No Display Question Number : Yes Is Question Mandatory : No Single Line Question Option : No Option Orientation : Vertical Correct Marks : 4 Wrong Marks : 1

The ratio of the total amount of money spent on housing to that spent on education was

1. 5:2
2. 2:5
3. 4:5
4. 5:4

Options :

21052910625. 1
21052910626. 2
21052910627. 3
21052910628. 4

Question Number : 78 Question Id : 2105292660 Question Type : MCQ Option Shuffling : No Display Question Number : Yes Is Question Mandatory : No Single Line Question Option : No Option Orientation : Vertical Correct Marks : 4 Wrong Marks : 1

Graph shows that the maximum amount was spent on

1. Food
2. Housing
3. Clothing
4. Others

Options :

21052910629. 1
21052910630. 2
21052910631. 3
21052910632. 4

**Question Number : 79 Question Id : 2105292661 Question Type : MCQ Option Shuffling : No Display Question Number : Yes
Is Question Mandatory : No Single Line Question Option : No Option Orientation : Vertical Correct Marks : 4 Wrong Marks : 1**

If the total expenditure of the year 2001 was Rs. 46000 the family saved during the year

1. Rs. 1,500
2. Rs. 15,000
3. Rs. 6,900
4. Rs. 5,000

Options :

21052910633. 1
21052910634. 2
21052910635. 3
21052910636. 4

Sub-Section Number :

4

Sub-Section Id :

21052929

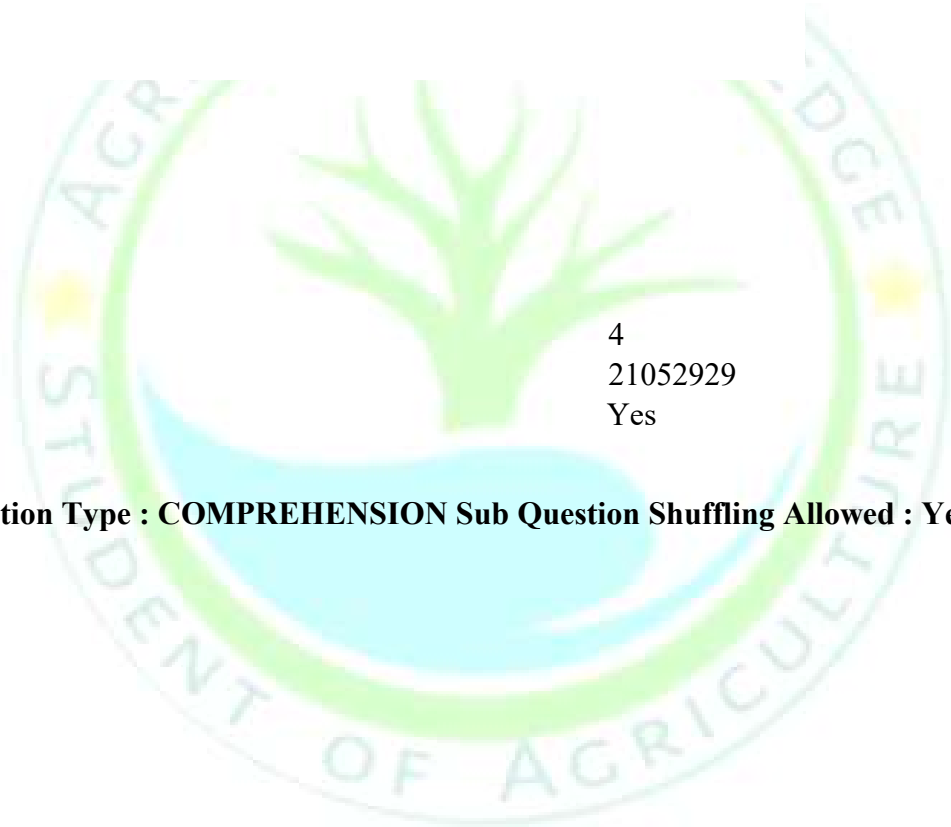
Question Shuffling Allowed :

Yes

Question Id : 2105292662 Question Type : COMPREHENSION Sub Question Shuffling Allowed : Yes Group Comprehension Questions : No

Question Numbers : (80 to 84)

Question Label : Comprehension



Read the given passage carefully and answer the questions that follow

Many years ago, I was the chief guest at a function. This was held in a hostel for poor students that had been built by a philanthropist. Food and shelter were free, but students had to bear other expenses like tuition and clothing.

In my younger days, I have come across many families who would look after students who were economically backward but otherwise bright. They used to help them with their fees or clothing and often with their food as well. In those days most colleges were located in larger towns. Many poor students who came to study in these towns used to stay with these families and would be treated as part of the family. The women of the house considered this a good deed and helped the poor students wholeheartedly. Today the situation is different. Even smaller towns have schools and colleges, so this custom has disappeared.

While I was sitting on the dais, I remembered the past and congratulated the person who had built the hostel. It was a good deed and of great help to many students. The hostel secretary told me about some of the students in the hostel who had secured ranks but had a problem paying their tuition fees.

He said "Madam, this year we have three students from different disciplines who have secured ranks. All of them are from extremely poor families. They have one more year to complete their degree." "What are they studying?" "One is medicine, the second in engineering and third in commerce" Can I meet them after the function?"

The function went on as usual. Often, at such functions, too much praise is lavished

on the chief guest. Sometimes, they even make exaggerated and false claims about the chief guest. I feel this unnecessary praising is the highest form of corruption, where people are easily fooled, and it encourages those who are praised to develop an inflated opinion of themselves. That's why in the twelfth century, in Karnataka the great revolutionary leader Basaveshwara warned in his teaching that praise is like a golden gallows. After the function, I met the three poor bright boys whom the secretary had told me about. They were a little puzzled, shy and nervous. All of them had the same story. Father in a small job unable to make ends meet, large families back in the village, no land or any other assets. Only sheer determination to excel in studies had brought them here against all odds.

Sub questions

Question Number : 80 Question Id : 2105292663 Question Type : MCQ Option Shuffling : No Display Question Number : Yes Is Question Mandatory : No Single Line Question Option : No Option Orientation : Vertical Correct Marks : 4 Wrong Marks : 1

How did poor students manage their expenses in towns, if a college education was not available to them in their villages?

1. They used to get regular help from the philanthropist
2. Their fees and clothing expenses were borne by the college
3. Many families used to provide them facilities on payment
4. They got help for fees, clothing food etc. from families in those towns

Options :

- 21052910637. 1
- 21052910638. 2
- 21052910639. 3
- 21052910640. 4

Question Number : 81 Question Id : 2105292664 Question Type : MCQ Option Shuffling : No Display Question Number : Yes Is Question Mandatory : No Single Line Question Option : No Option Orientation : Vertical Correct Marks : 4 Wrong Marks : 1

Why has the practice of students from villages staying with families in towns stopped nowadays?

1. Families have found education has become very expensive
2. Higher education is available to students even in smaller towns
3. There is no need for students to go in for higher education these days
4. The situation is altogether different as the educational structure has changed

Options :

- 21052910641. 1
- 21052910642. 2
- 21052910643. 3
- 21052910644. 4

Question Number : 82 Question Id : 2105292665 Question Type : MCQ Option Shuffling : No Display Question Number : Yes Is Question Mandatory : No Single Line Question Option : No Option Orientation : Vertical Correct Marks : 4 Wrong Marks : 1

What does the author dislike about functions?

1. The false or exaggerated praise showered on the chief guest
2. Selection of corrupt person as chief guest
3. The awkward situation created by the audience
4. The shyness and nervousness of the audience

Options :

- 21052910645. 1
- 21052910646. 2
- 21052910647. 3

21052910648. 4

Question Number : 83 Question Id : 2105292666 Question Type : MCQ Option Shuffling : No Display Question Number : Yes Is Question Mandatory : No Single Line Question Option : No Option Orientation : Vertical Correct Marks : 4 Wrong Marks : 1

Which of the following was NOT a common factors among the students?

1. Subjects of study
2. Family background
3. Lack of resources
4. Intelligence

Options :

21052910649. 1
21052910650. 2
21052910651. 3
21052910652. 4

Question Number : 84 Question Id : 2105292667 Question Type : MCQ Option Shuffling : No Display Question Number : Yes Is Question Mandatory : No Single Line Question Option : No Option Orientation : Vertical Correct Marks : 4 Wrong Marks : 1

The three students had come to attend college because of their

1. Family insistence
2. Poor financial background
3. Strong willpower
4. Faith in philanthropists

Options :

21052910653. 1
21052910654. 2

21052910655. 3

21052910656. 4

Sub-Section Number :

5

Sub-Section Id :

21052930

Question Shuffling Allowed :

Yes

Question Number : 85 Question Id : 2105292668 Question Type : MCQ Option Shuffling : No Display Question Number : Yes Is

Question Mandatory : No Single Line Question Option : No Option Orientation : Vertical

Correct Marks : 4 Wrong Marks : 1

Which of the following phrases could suitably replace the phrase highlighted in the given sentence, without changing its sense?

A true friend never **blows hot and cold** one another

1. Gets in a temper
2. Supports and opposes
3. Gets dishonest
4. Loses trust and faith

Options :

21052910657. 1

21052910658. 2

21052910659. 3

21052910660. 4

Question Number : 86 Question Id : 2105292669 Question Type : MCQ Option Shuffling : No Display Question Number : Yes

Is Question Mandatory : No Single Line Question Option : No Option Orientation : Vertical Correct Marks : 4 Wrong Marks :

1

Which of the following phrases could suitably replace the highlighted phrase in the sentence given below, without changing its meaning?

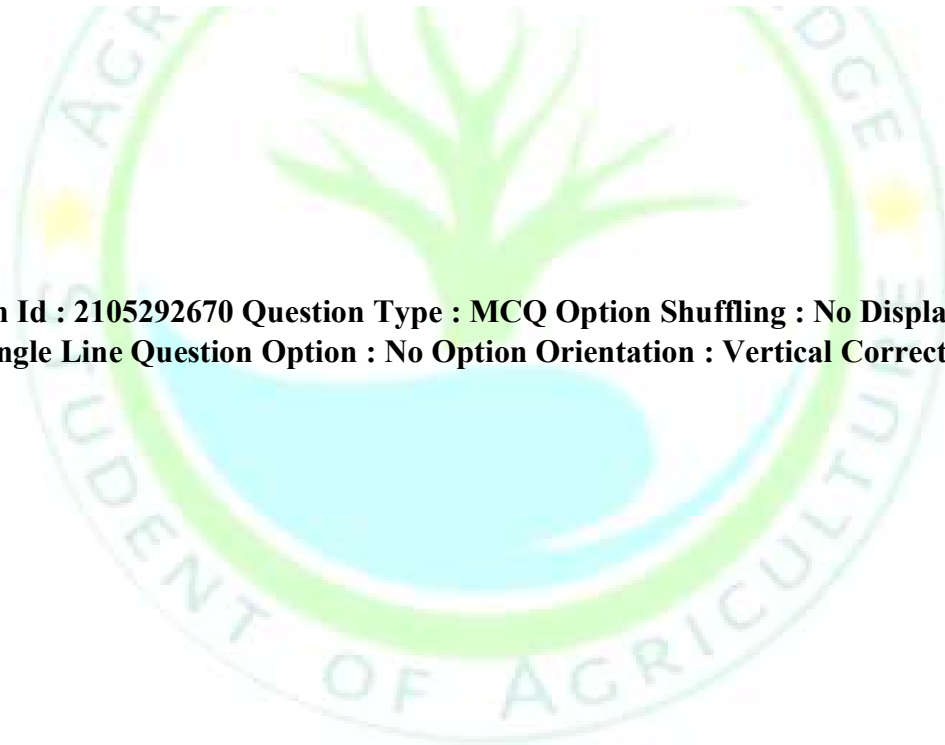
This is an organization which helps the poor by providing loans mostly **at less** rates of Interest.

1. At much smaller
2. With such lower
3. At very low
4. For so little

Options :

21052910661. 1
21052910662. 2
21052910663. 3
21052910664. 4

**Question Number : 87 Question Id : 2105292670 Question Type : MCQ Option Shuffling : No Display Question Number : Yes
Is Question Mandatory : No Single Line Question Option : No Option Orientation : Vertical Correct Marks : 4 Wrong Marks : 1**



Match the synonyms of words in **List I** with **List II**

List I	List II
A. Voracious	I. Unsuccessful
B. Abortive	II. Holding fast
C. Tenacious	III. Experimental
D. Tentative	IV. Ravenous

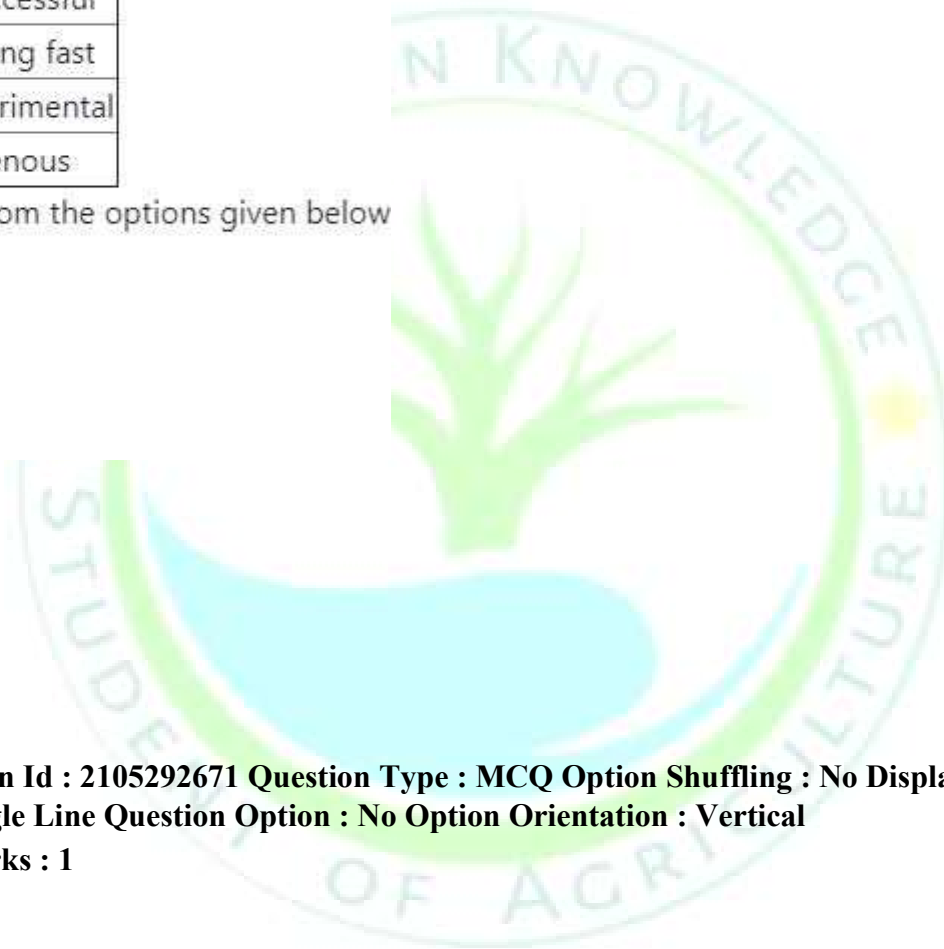
Choose the **correct** answer from the options given below

1. A - IV, B - III, C - II, D - I
2. A - I, B - IV, C - II, D - III
3. A - II, B - I, C - IV, D - III
4. A - IV, B - I, C - II, D - III

Options :

21052910665. 1
21052910666. 2
21052910667. 3
21052910668. 4

Question Number : 88 Question Id : 2105292671 Question Type : MCQ Option Shuffling : No Display Question Number : Yes Is Question Mandatory : No Single Line Question Option : No Option Orientation : Vertical Correct Marks : 4 Wrong Marks : 1



Match the antonyms of words in **List I** with **List II**

List I	List II
A. Withdraw	I. Sincere
B. Heartfelt	II. Advance
C. Pit	III. Peak
D. Rotund	IV. Thin

Choose the **correct** answer from the options given below

1. A - II, B - I, C - III, D - IV
2. A - II, B - I, C - IV, D - III
3. A - III, B - IV, C - I, D - II
4. A - III, B - IV, C - II, D - I

Options :

21052910669. 1
21052910670. 2
21052910671. 3
21052910672. 4

**Question Number : 89 Question Id : 2105292672 Question Type : MCQ Option Shuffling : No Display Question Number : Yes
Is Question Mandatory : No Single Line Question Option : No Option Orientation : Vertical Correct Marks : 4 Wrong Marks : 1**

Which of the following words would most appropriately complete the given sentence?

Computers are useless _____ you know how to use them.

1. Therefore
2. If
3. Unless
4. Hence

Options :

21052910673. 1
21052910674. 2
21052910675. 3
21052910676. 4

Question Number : 90 Question Id : 2105292673 Question Type : MCQ Option Shuffling : No Display Question Number : Yes Is Question Mandatory : No Single Line Question Option : No Option Orientation : Vertical Correct Marks : 4 Wrong Marks : 1

Which of the following words would most appropriately complete the given sentence?

We need more information before we can reach a _____

1. Development
2. Fact
3. Design
4. Decision

Options :

21052910677. 1
21052910678. 2
21052910679. 3

21052910680. 4

Question Number : 91 Question Id : 2105292674 Question Type : MCQ Option Shuffling : No Display Question Number : Yes Is Question Mandatory : No Single Line Question Option : No Option Orientation : Vertical Correct Marks : 4 Wrong Marks : 1

Find the meaning of the given bold phrasal verb

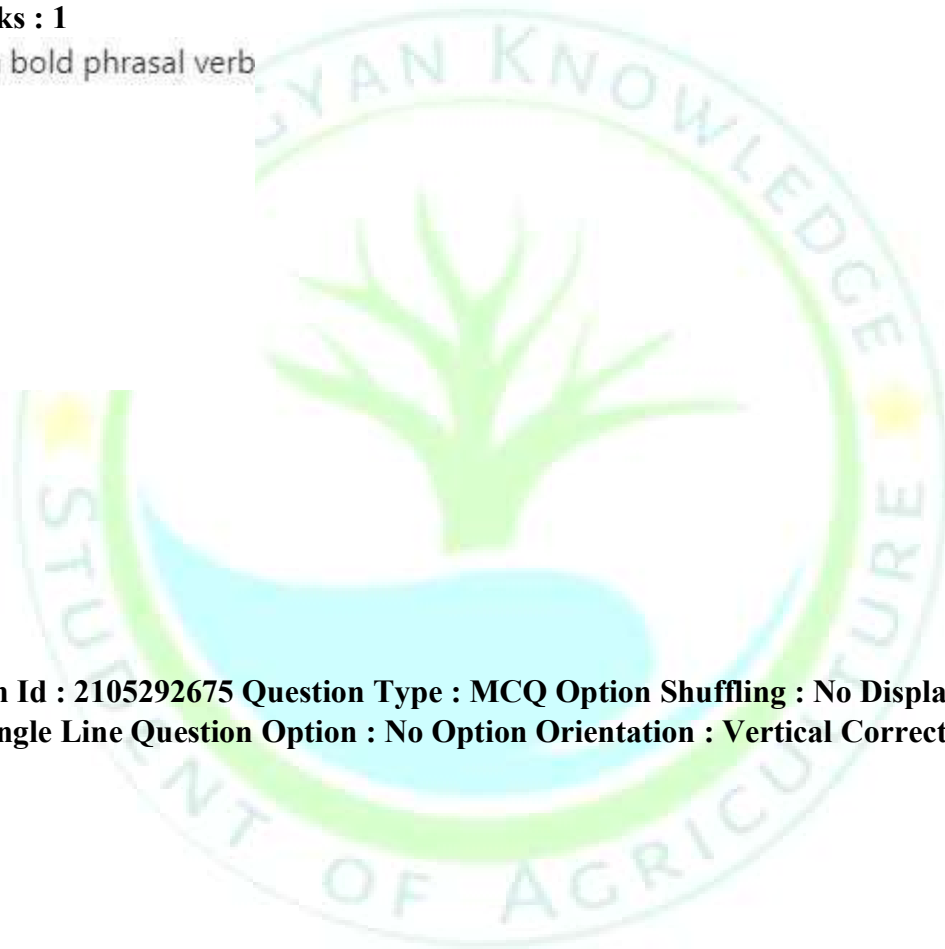
Count On

1. Estimate
2. Forecast
3. Depend
4. Include

Options :

21052910681. 1
21052910682. 2
21052910683. 3
21052910684. 4

Question Number : 92 Question Id : 2105292675 Question Type : MCQ Option Shuffling : No Display Question Number : Yes Is Question Mandatory : No Single Line Question Option : No Option Orientation : Vertical Correct Marks : 4 Wrong Marks : 1



Find the meaning of the given bold phrasal verb

Run into

1. Meet by chance
2. To collide
3. To argue
4. To run towards something

Options :

21052910685. 1
21052910686. 2
21052910687. 3
21052910688. 4

Question Number : 93 Question Id : 2105292676 Question Type : MCQ Option Shuffling : No Display Question Number : Yes Is Question Mandatory : No Single Line Question Option : No Option Orientation : Vertical Correct Marks : 4 Wrong Marks : 1

Which of the following would replace the underlined text to improve the sentence?

In the 20th century, the average life span in India for a working class family was 12 years less than a member of the aristocracy.

1. Of a member of the aristocracy
2. That of a member of the aristocracy
3. Those of member of the aristocracy
4. A member of the aristocracy

Options :

21052910689. 1
21052910690. 2

21052910691. 3

21052910692. 4

Question Number : 94 Question Id : 2105292677 Question Type : MCQ Option Shuffling : No Display Question Number : Yes Is Question Mandatory : No Single Line Question Option : No Option Orientation : Vertical Correct Marks : 4 Wrong Marks : 1

Which of the following would replace the underlined text to improve the sentence?

Anusha has very good habits. Every night before bedtime, she reads a book, singing a song and says a prayer.

1. Reads a book, sings a song and says a prayer
2. Reads a book, singing a song and says a prayer
3. Reading a book, sing a song and said a prayer
4. Reading a book, singing a song and says a prayer

Options :

21052910693. 1

21052910694. 2

21052910695. 3

21052910696. 4

Question Number : 95 Question Id : 2105292678 Question Type : MCQ Option Shuffling : No Display Question Number : Yes Is Question Mandatory : No Single Line Question Option : No Option Orientation : Vertical Correct Marks : 4 Wrong Marks : 1

The entrepreneur who copies technique and technology innovated by others is

1. Innovative entrepreneur
2. Drone entrepreneur
3. Imitative entrepreneur
4. Fabian entrepreneur

Options :

21052910697. 1
21052910698. 2
21052910699. 3
21052910700. 4

Question Number : 96 Question Id : 2105292679 Question Type : MCQ Option Shuffling : No Display Question Number : Yes Is Question Mandatory : No Single Line Question Option : No Option Orientation : Vertical Correct Marks : 4 Wrong Marks : 1

Two countries will have no incentive to trade in two goods, if

1. The opportunity cost for both countries in producing two goods is same
2. One country has absolute advantages in the production of both goods
3. One country has comparative advantages in the production of both goods
4. None of the above

Options :

21052910701. 1
21052910702. 2
21052910703. 3
21052910704. 4

Question Number : 97 Question Id : 2105292680 Question Type : MCQ Option Shuffling : No Display Question Number : Yes Is Question Mandatory : No Single Line Question Option : No Option Orientation : Vertical

Correct Marks : 4 Wrong Marks : 1

Commodity exchange enables producers and consumers to hedge which one of the following, given the uncertainty of the future?

1. Price risk
2. Seasonal risk
3. Weather risk
4. Production risk

Options :

21052910705. 1
21052910706. 2
21052910707. 3
21052910708. 4

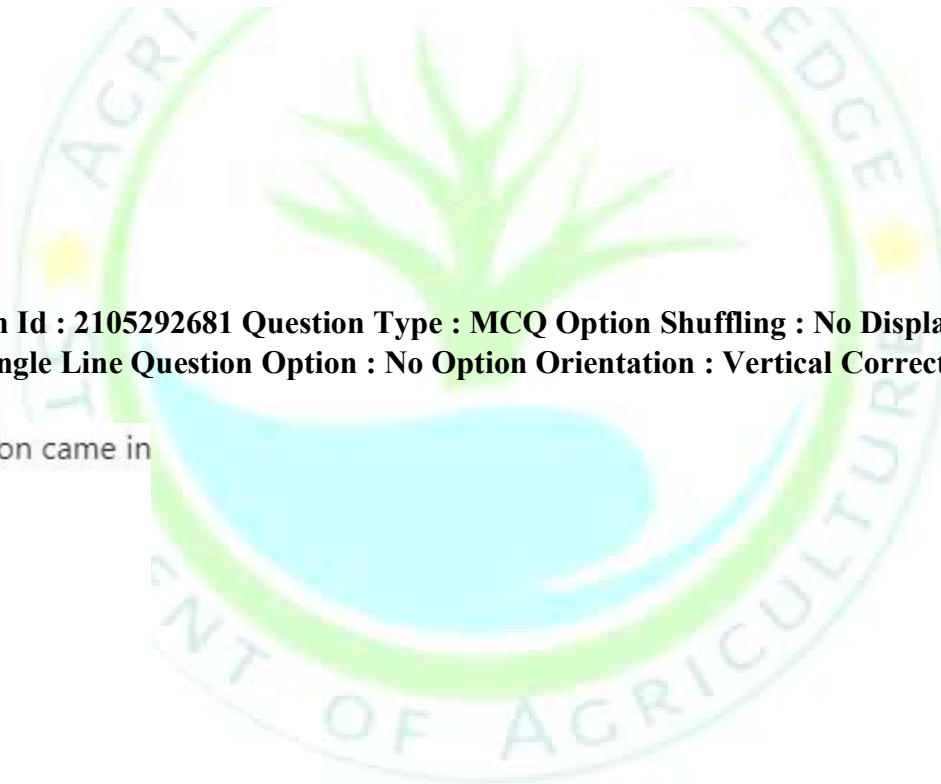
Question Number : 98 Question Id : 2105292681 Question Type : MCQ Option Shuffling : No Display Question Number : Yes Is Question Mandatory : No Single Line Question Option : No Option Orientation : Vertical Correct Marks : 4 Wrong Marks : 1

Codex Alimentarius Commission came in

1. 1955
2. 1963
3. 1970
4. 1975

Options :

21052910709. 1
21052910710. 2
21052910711. 3
21052910712. 4



Question Number : 99 Question Id : 2105292682 Question Type : MCQ Option Shuffling : No Display Question Number : Yes Is Question Mandatory : No Single Line Question Option : No Option Orientation : Vertical Correct Marks : 4 Wrong Marks : 1

When a large number of sellers deal with heterogeneous and differentiated commodity, then it is called

1. Perfect competition
2. Monopoly
3. Oligopoly
4. Monopolistic competition

Options :

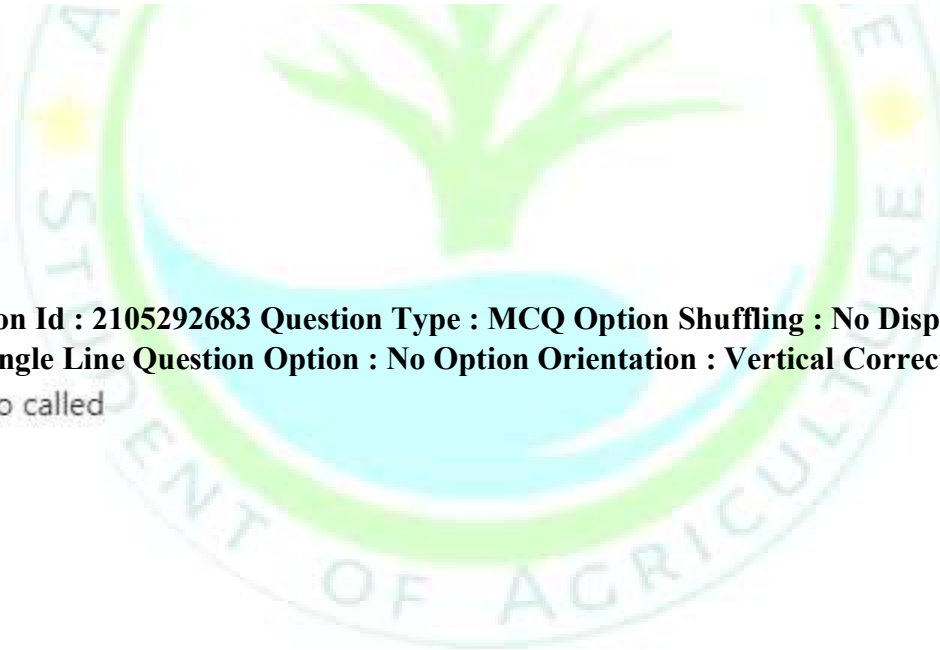
21052910713. 1
21052910714. 2
21052910715. 3
21052910716. 4

Question Number : 100 Question Id : 2105292683 Question Type : MCQ Option Shuffling : No Display Question Number : Yes Is Question Mandatory : No Single Line Question Option : No Option Orientation : Vertical Correct Marks : 4 Wrong Marks : 1
Macro-economic theory is also called

1. Income theory
2. Price theory
3. National theory
4. Consumption theory

Options :

21052910717. 1
21052910718. 2
21052910719. 3



21052910720. 4

Question Number : 101 Question Id : 2105292684 Question Type : MCQ Option Shuffling : No Display Question Number : Yes Is Question Mandatory : No Single Line Question Option : No Option Orientation : Vertical Correct Marks : 4 Wrong Marks : 1

Market modification, product modification, market program modification strategy come in which stage of product life cycle?

1. Maturity
2. Growth
3. Decline
4. Introduction

Options :

21052910721. 1
21052910722. 2
21052910723. 3
21052910724. 4

Question Number : 102 Question Id : 2105292685 Question Type : MCQ Option Shuffling : No Display Question Number : Yes Is Question Mandatory : No Single Line Question Option : No Option Orientation : Vertical Correct Marks : 4 Wrong Marks : 1

The consumers' surplus is worked out by

1. What the consumer is willing to pay – what he actually pays
2. What the consumer paid –Total utility gained
3. What the consumer is willing to pay – marginal utility gained
4. What the consumer paid – balanced amount left with consumer

Options :

21052910725. 1

21052910726. 2

21052910727. 3

21052910728. 4

Question Number : 103 Question Id : 2105292686 Question Type : MCQ Option Shuffling : No Display Question Number : Yes Is Question Mandatory : No Single Line Question Option : No Option Orientation : Vertical Correct Marks : 4 Wrong Marks : 1

The goods which have positive income elasticity of demand are called

1. Giffen goods
2. Normal goods
3. Inferior goods
4. Positive goods

Options :

21052910729. 1

21052910730. 2

21052910731. 3

21052910732. 4

Question Number : 104 Question Id : 2105292687 Question Type : MCQ Option Shuffling : No Display Question Number : Yes Is Question Mandatory : No Single Line Question Option : No Option Orientation : Vertical Correct Marks : 4 Wrong Marks : 1

Which one of the following is NOT one of the P's of marketing mix?

1. Price
2. Place
3. Promotion
4. Partner

Options :

21052910733. 1

21052910734. 2

21052910735. 3

21052910736. 4

Question Number : 105 Question Id : 2105292688 Question Type : MCQ Option Shuffling : No Display Question Number : Yes Is Question Mandatory : No Single Line Question Option : No Option Orientation : Vertical Correct Marks : 4 Wrong Marks : 1

Federation exists at which level of cooperative marketing societies?

1. Village
2. District
3. State
4. Country

Options :

21052910737. 1

21052910738. 2

21052910739. 3

21052910740. 4

Question Number : 106 Question Id : 2105292689 Question Type : MCQ Option Shuffling : No Display Question Number : Yes Is Question Mandatory : No Single Line Question Option : No Option Orientation : Vertical Correct Marks : 4 Wrong Marks : 1

Excel is an example of

1. A spreadsheet
2. An expert system
3. A database
4. Artificial intelligence

Options :

21052910741. 1
21052910742. 2
21052910743. 3
21052910744. 4

Question Number : 107 Question Id : 2105292690 Question Type : MCQ Option Shuffling : No Display Question Number : Yes Is Question Mandatory : No Single Line Question Option : No Option Orientation : Vertical

Correct Marks : 4 Wrong Marks : 1

List I with List II

List I	List II
(Species)	(Leading States)
A. Poultry	I. Andhra Pradesh
B. Cattle	II. Tamil Nadu
C. Fish	III. Telangana
D. Sheep	IV. West Bengal

Choose the **correct** answer from the options given below:

1. A - IV, B - II, C - I, D - III
2. A - II, B - I, C - IV, D - III
3. A - II, B - IV, C - I, D - III
4. A - IV, B - I, C - II, D - III

Options :

21052910745. 1
21052910746. 2
21052910747. 3
21052910748. 4

Question Number : 108 Question Id : 2105292691 Question Type : MCQ Option Shuffling : No Display Question Number : Yes Is Question Mandatory : No Single Line Question Option : No Option Orientation : Vertical Correct Marks : 4 Wrong Marks : 1

Match **List I** with **List II**

List I	List II
(Middlemen)	(Function)
A. Hamals	I. Buy and sell on their own
B. Commission agents	II. Job of loading and unloading in the market
C. Merchant	III. Brings together buyer and seller on the same platform for negotiation
D. Brokers	IV. Takes over physical handling of the produce and arranges for sale

Choose the **correct** answer from the options given below:

1. A - IV, B - III, C - I, D - II
2. A - II, B - IV, C - I, D - III
3. A - IV, B - I, C - III, D - II
4. A - II, B - III, C - IV, D - I

Options :

21052910749. 1
21052910750. 2
21052910751. 3
21052910752. 4

Question Number : 109 Question Id : 2105292692 Question Type : MCQ Option Shuffling : No Display Question Number : Yes Is Question Mandatory : No Single Line Question Option : No Option Orientation : Vertical Correct Marks : 4 Wrong Marks : 1

Which of the following statements is/are true with respect to Direct Benefit Transfer (DBT) for fertilizers?

- A. Subsidy is paid directly to the farmers on the basis of actual purchase from the retailers
- B. Subsidy is released to the fertilizer companies on the basis of actual sale to the beneficiaries by the retailers
- C. Sale is made through point of sale (POS) devices
- D. Beneficiaries are identified by Aadhar card, KCC

Choose the **correct** answer from the options given below:

- 1. A only
- 2. B only
- 3. A, C and D only
- 4. B, C and D only

Options :

- 21052910753. 1
- 21052910754. 2
- 21052910755. 3
- 21052910756. 4

Question Number : 110 Question Id : 2105292693 Question Type : MCQ Option Shuffling : No Display Question Number : Yes Is Question Mandatory : No Single Line Question Option : No Option Orientation : Vertical Correct Marks : 4 Wrong Marks : 1

Which of the following is/are characteristics of an entrepreneur?

- A. Risk-taker
- B. Strong financial background
- C. Effective communicator
- D. Knowledge across sectors

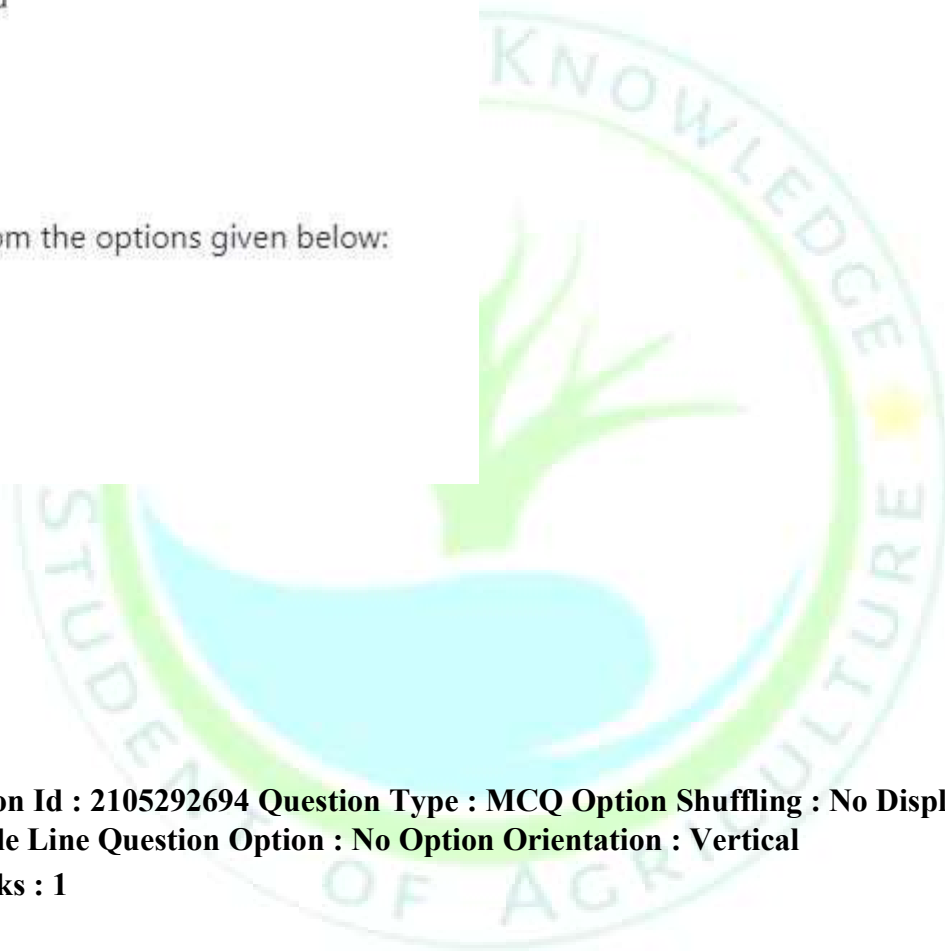
Choose the **correct** answer from the options given below:

- 1. A and B only
- 2. A and C only
- 3. B and C only
- 4. B and D only

Options :

- 21052910757. 1
- 21052910758. 2
- 21052910759. 3
- 21052910760. 4

Question Number : 111 Question Id : 2105292694 Question Type : MCQ Option Shuffling : No Display Question Number : Yes Is Question Mandatory : No Single Line Question Option : No Option Orientation : Vertical Correct Marks : 4 Wrong Marks : 1



India stands at first position with respect to number of

- A. Cattle
- B. Buffalo
- C. Goat
- D. Sheep
- E. Total livestock

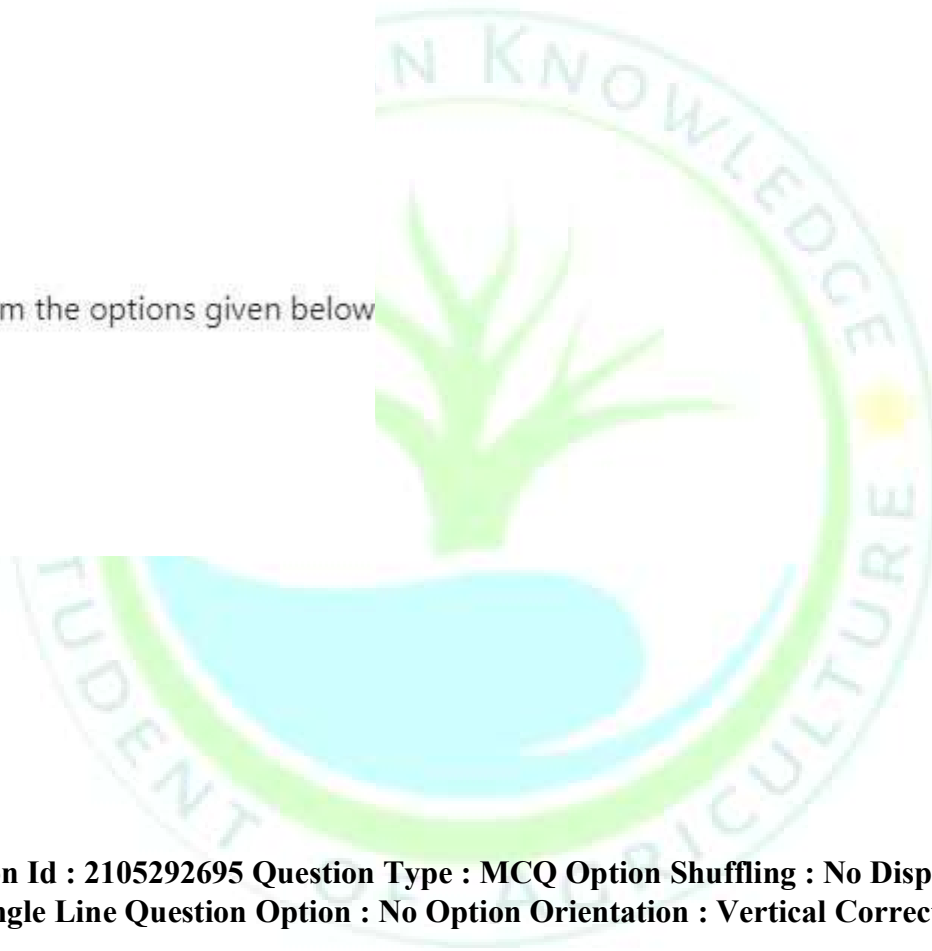
Choose the **correct** answer from the options given below

- 1. A only
- 2. A and B only
- 3. A, B and D only
- 4. A, B and E only

Options :

- 21052910761. 1
- 21052910762. 2
- 21052910763. 3
- 21052910764. 4

**Question Number : 112 Question Id : 2105292695 Question Type : MCQ Option Shuffling : No Display Question Number : Yes
Is Question Mandatory : No Single Line Question Option : No Option Orientation : Vertical Correct Marks : 4 Wrong Marks : 1**



The milk production in India in 2018-19 stands at

1. 128 million tonnes
2. 158 million tonnes
3. 188 million tonnes
4. 218 million tonnes

Options :

21052910765. 1
21052910766. 2
21052910767. 3
21052910768. 4

**Question Number : 113 Question Id : 2105292696 Question Type : MCQ Option Shuffling : No Display Question Number : Yes
Is Question Mandatory : No Single Line Question Option : No Option Orientation : Vertical Correct Marks : 4 Wrong Marks : 1**

The per capita availability of milk per day in India (2018-19) is

1. 294 g
2. 394 g
3. 494 g
4. 594 g

Options :

21052910769. 1
21052910770. 2
21052910771. 3
21052910772. 4

**Question Number : 114 Question Id : 2105292697 Question Type : MCQ Option Shuffling : No Display Question Number : Yes
Is Question Mandatory : No Single Line Question Option : No Option Orientation : Vertical Correct Marks : 4 Wrong Marks : 1**

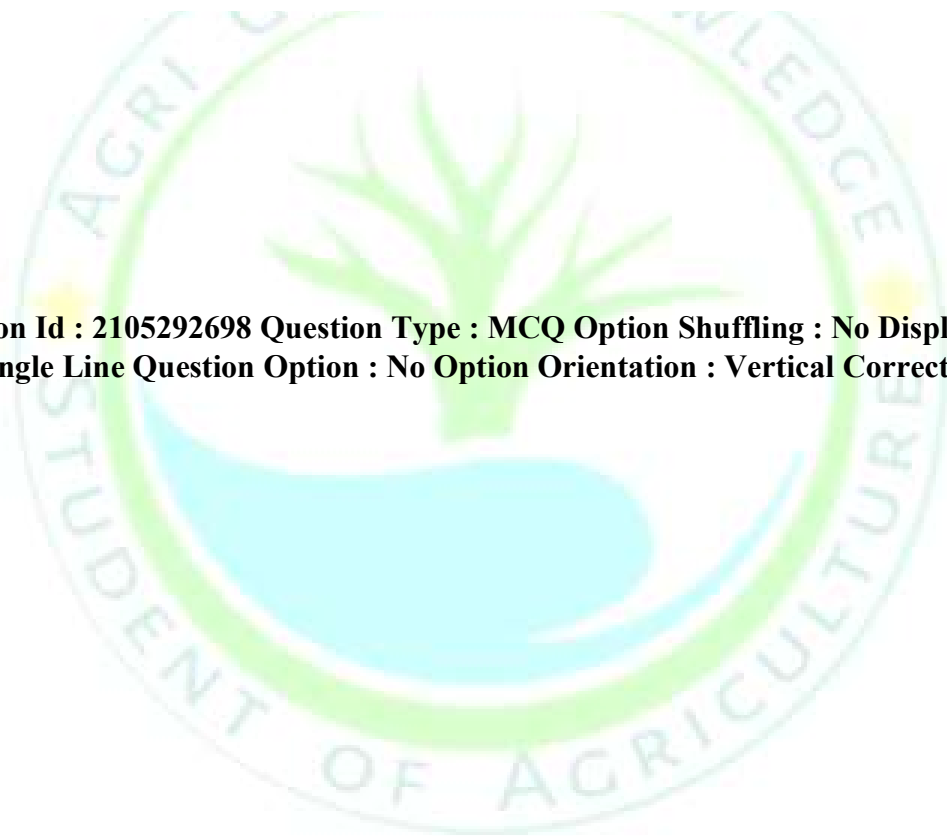
Premium payment rate in case of horticultural crops under Pradhan Mantri Fasal Bima Yojana (PMFBY) is

1. 1.5%
2. 2%
3. 3%
4. 5%

Options :

21052910773. 1
21052910774. 2
21052910775. 3
21052910776. 4

**Question Number : 115 Question Id : 2105292698 Question Type : MCQ Option Shuffling : No Display Question Number : Yes
Is Question Mandatory : No Single Line Question Option : No Option Orientation : Vertical Correct Marks : 4 Wrong Marks : 1**



Which of the following statement/s is/are true with respect to agricultural credit in India

- A. Agricultural credit is very low in eastern states
- B. Agricultural credit is high in southern states
- C. Agricultural credit is uniformly distributed across states in India
- D. Agricultural credit is low in western states

Choose the **correct** answer from the options given below

- 1. A only
- 2. B only
- 3. A and B only
- 4. A, B and D only

Options :

- 21052910777. 1
- 21052910778. 2
- 21052910779. 3
- 21052910780. 4

Question Number : 116 Question Id : 2105292699 Question Type : MCQ Option Shuffling : No Display Question Number : Yes Is Question Mandatory : No Single Line Question Option : No Option Orientation : Vertical Correct Marks : 4 Wrong Marks : 1

Lower rate of agricultural mechanization in India is because of

- A. Small farm holding
- B. Credit unavailability
- C. Low awareness
- D. High cost of ownership

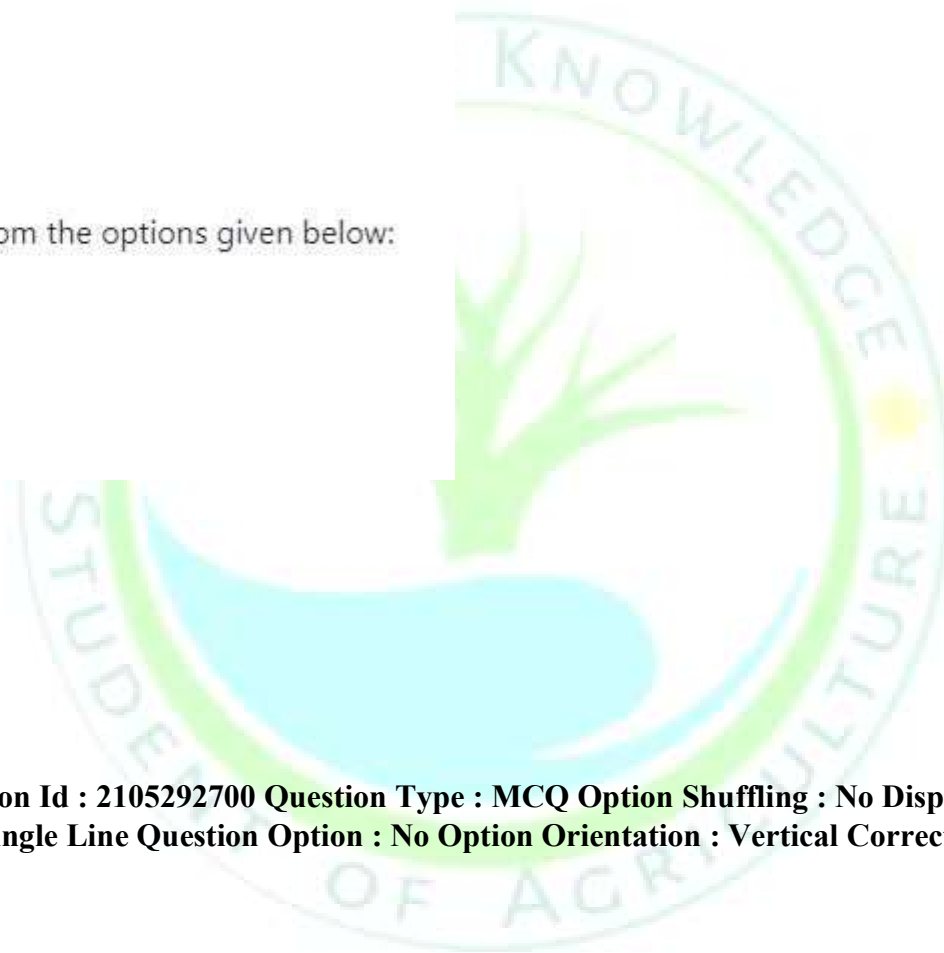
Choose the **correct** answer from the options given below:

- 1. A and B only
- 2. A and C only
- 3. B and C only
- 4. B and D only

Options :

- 21052910781. 1
- 21052910782. 2
- 21052910783. 3
- 21052910784. 4

**Question Number : 117 Question Id : 2105292700 Question Type : MCQ Option Shuffling : No Display Question Number : Yes
Is Question Mandatory : No Single Line Question Option : No Option Orientation : Vertical Correct Marks : 4 Wrong Marks : 1**



Pradhan Mantri Kisan Samman Nidhi (PM-KISAN) provides all farmer families in India an income support of

1. ₹ 6,000 per month
2. ₹ 6,000 per year
3. ₹ 12,000 per month
4. ₹ 12,000 per year

Options :

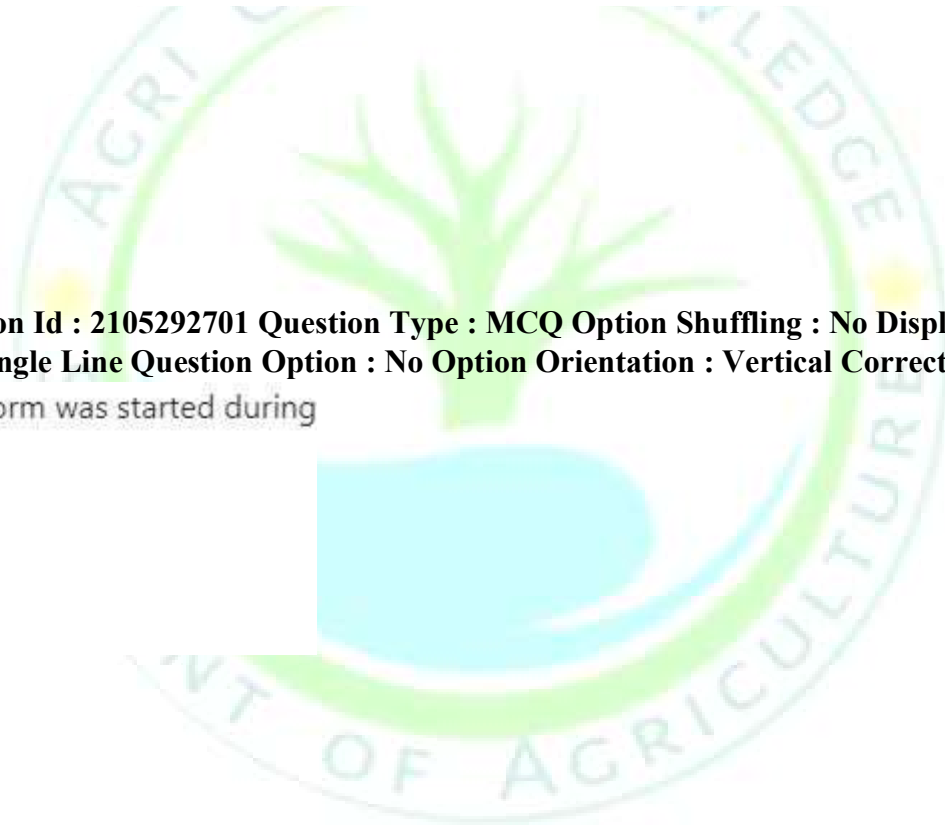
21052910785. 1
21052910786. 2
21052910787. 3
21052910788. 4

Question Number : 118 Question Id : 2105292701 Question Type : MCQ Option Shuffling : No Display Question Number : Yes Is Question Mandatory : No Single Line Question Option : No Option Orientation : Vertical Correct Marks : 4 Wrong Marks : 1
eNAM an online trading platform was started during

1. 2014
2. 2015
3. 2016
4. 2017

Options :

21052910789. 1
21052910790. 2
21052910791. 3
21052910792. 4



Question Number : 119 Question Id : 2105292702 Question Type : MCQ Option Shuffling : No Display Question Number : Yes
Is Question Mandatory : No Single Line Question Option : No Option Orientation : Vertical Correct Marks : 4 Wrong Marks : 1
Which one of the following is a non-probability sampling?

1. Quota sampling
2. Systematic sampling
3. Cluster sampling
4. Area sampling

Options :

21052910793. 1
21052910794. 2
21052910795. 3
21052910796. 4

Question Number : 120 Question Id : 2105292703 Question Type : MCQ Option Shuffling : No Display Question Number : Yes
Is Question Mandatory : No Single Line Question Option : No Option Orientation : Vertical Correct Marks : 4 Wrong Marks : 1
Fahrenheit scale is an example of

1. Nominal scale
2. Ordinal scale
3. Interval scale
4. Ratio scale

Options :

21052910797. 1
21052910798. 2
21052910799. 3
21052910800. 4

